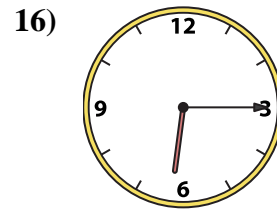
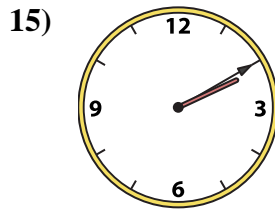
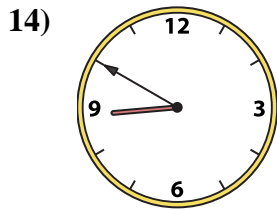
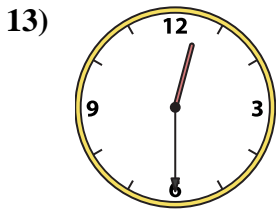
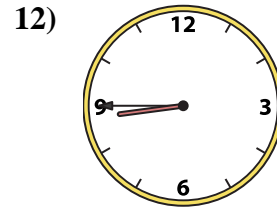
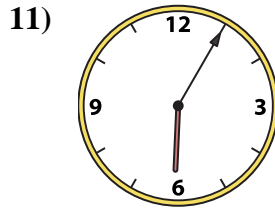
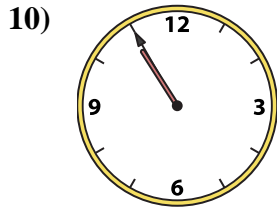
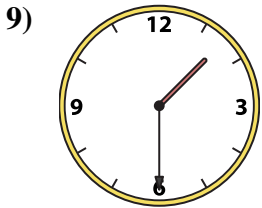
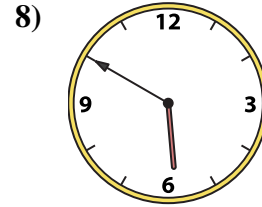
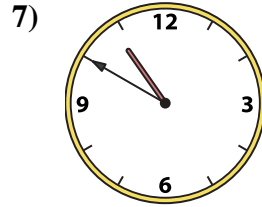
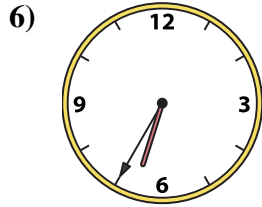

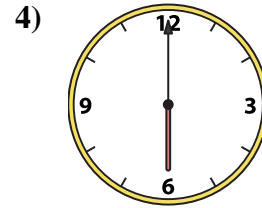
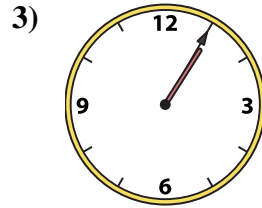

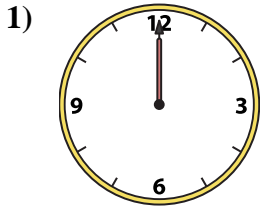




Match the analog clock to the digital clock.

Answers



A. **6:05**

B. **1:30**

C. **6:00**

D. **6:35**

E. **12:00**

F. **2:10**

G. **12:30**

H. **10:50**

I. **1:05**

J. **8:45**

K. **8:50**

L. **5:50**

M. **6:25**

N. **10:55**

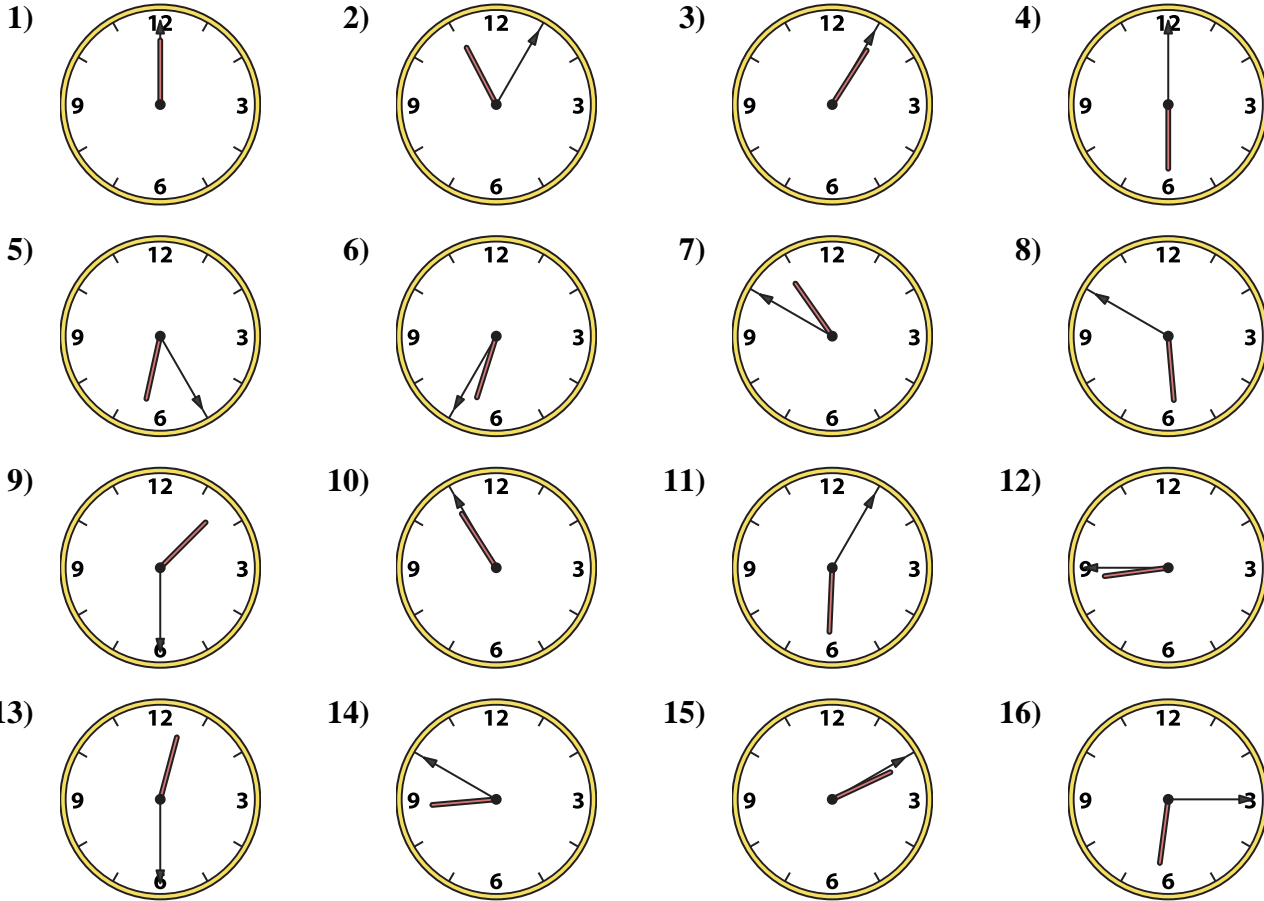
O. **11:05**

P. **6:15**

1. _____
2. _____
3. _____
4. _____
5. _____
6. _____
7. _____
8. _____
9. _____
10. _____
11. _____
12. _____
13. _____
14. _____
15. _____
16. _____



Match the analog clock to the digital clock.



- A. 6:05
- B. 1:30
- C. 6:00
- D. 6:35
- E. 12:00
- F. 2:10
- G. 12:30
- H. 10:50
- I. 1:05
- J. 8:45
- K. 8:50
- L. 5:50
- M. 6:25
- N. 10:55
- O. 11:05
- P. 6:15

Answers

- 1. **E**
- 2. **O**
- 3. **I**
- 4. **C**
- 5. **M**
- 6. **D**
- 7. **H**
- 8. **L**
- 9. **B**
- 10. **N**
- 11. **A**
- 12. **J**
- 13. **G**
- 14. **K**
- 15. **F**
- 16. **P**