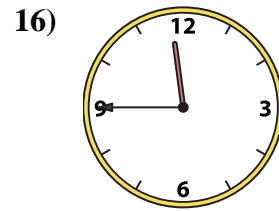
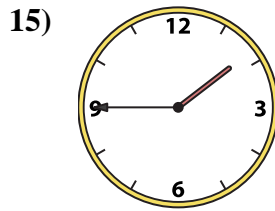
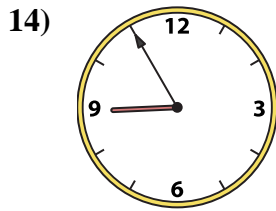
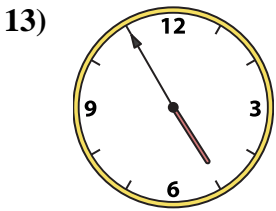
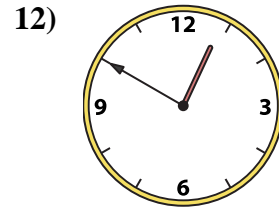
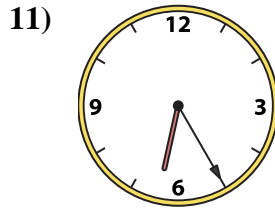
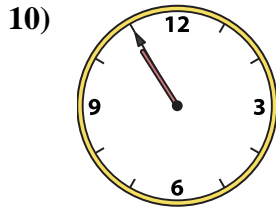
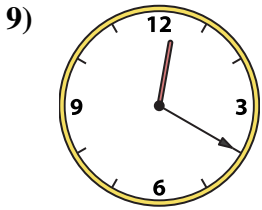
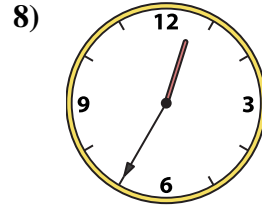
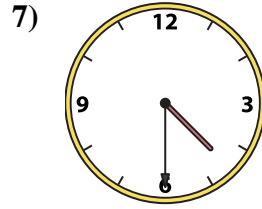
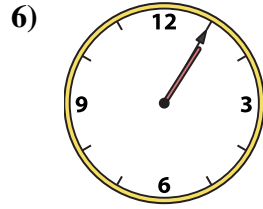
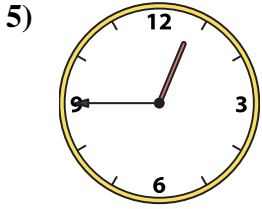
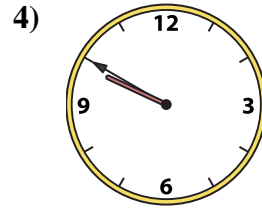
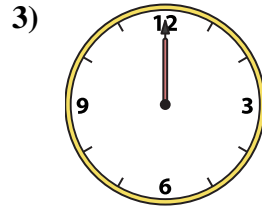
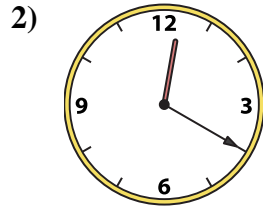





Match the analog clock to the digital clock.

Answers



A. 4:30

B. 9:50

C. 12:50

D. 12:20

E. 1:05

F. 10:55

G. 11:45

H. 8:55

I. 12:20

J. 12:35

K. 1:45

L. 12:45

M. 6:25

N. 4:55

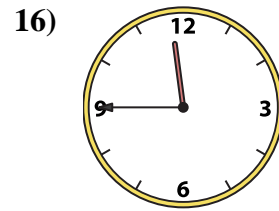
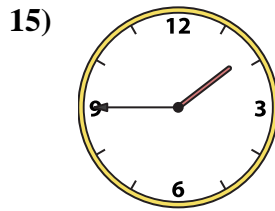
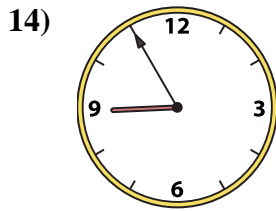
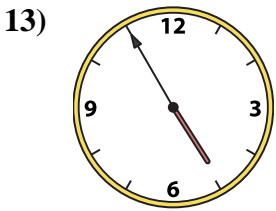
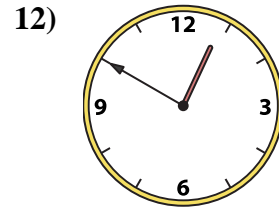
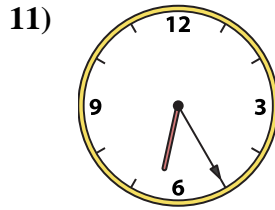
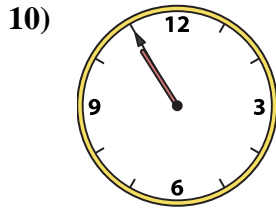
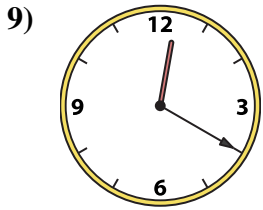
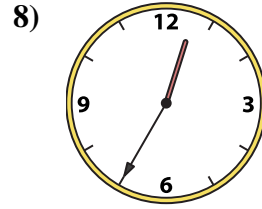
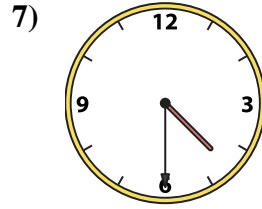
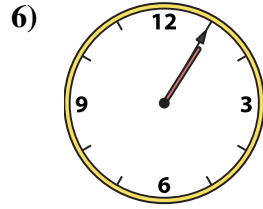
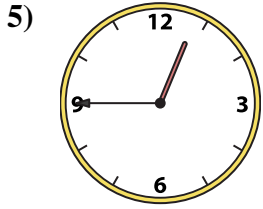
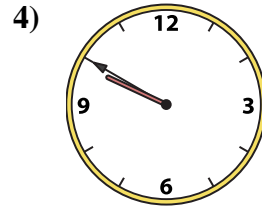
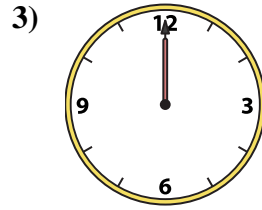
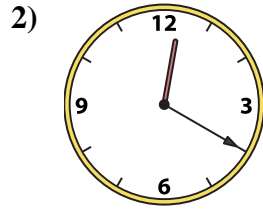

O. 12:00

P. 11:10

1. _____
2. _____
3. _____
4. _____
5. _____
6. _____
7. _____
8. _____
9. _____
10. _____
11. _____
12. _____
13. _____
14. _____
15. _____
16. _____



Match the analog clock to the digital clock.



A. **4:30**

B. **9:50**

C. **12:50**

D. **12:20**

E. **1:05**

F. **10:55**

G. **11:45**

H. **8:55**

I. **12:20**

J. **12:35**

K. **1:45**

L. **12:45**

M. **6:25**

N. **4:55**

O. **12:00**

P. **11:10**

Answers

1. **P**

2. **D**

3. **O**

4. **B**

5. **L**

6. **E**

7. **A**

8. **J**

9. **I**

10. **F**

11. **M**

12. **C**

13. **N**

14. **H**

15. **K**

16. **G**