

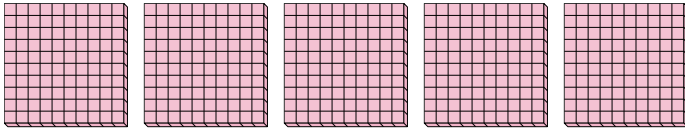


Use the groups to answer each question.

**Answers**

1) a. How many groups of 100 are there?

b. How many small blocks are there total?




1a. \_\_\_\_\_

1b. \_\_\_\_\_

2) a. How many groups of 100 are there?

b. How many small blocks are there total?

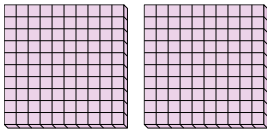


2a. \_\_\_\_\_

2b. \_\_\_\_\_

3) a. How many groups of 100 are there?

b. How many small blocks are there total?

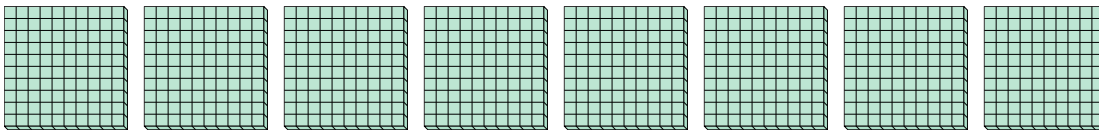


3a. \_\_\_\_\_

3b. \_\_\_\_\_

4) a. How many groups of 100 are there?

b. How many small blocks are there total?

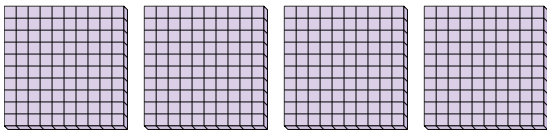


4a. \_\_\_\_\_

4b. \_\_\_\_\_

5) a. How many groups of 100 are there?

b. How many small blocks are there total?

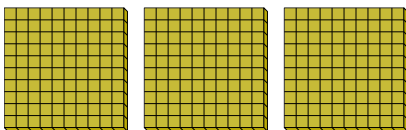


5a. \_\_\_\_\_

5b. \_\_\_\_\_

6) a. How many groups of 100 are there?

b. How many small blocks are there total?

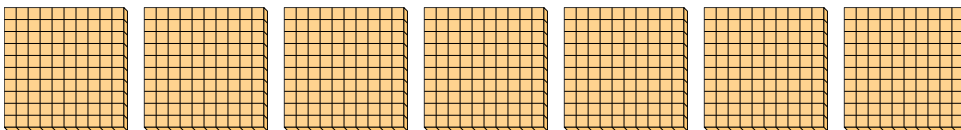


6a. \_\_\_\_\_

6b. \_\_\_\_\_

7) a. How many groups of 100 are there?

b. How many small blocks are there total?



7a. \_\_\_\_\_

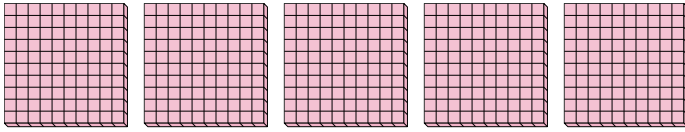
7b. \_\_\_\_\_



Use the groups to answer each question.

1) a. How many groups of 100 are there?

b. How many small blocks are there total?




1a. 5

1b. 500

2) a. How many groups of 100 are there?

b. How many small blocks are there total?

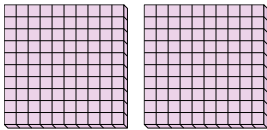


2a. 1

2b. 100

3) a. How many groups of 100 are there?

b. How many small blocks are there total?

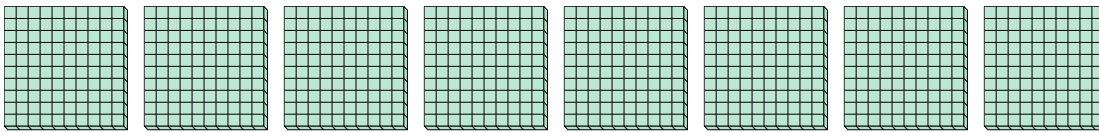


3a. 2

3b. 200

4) a. How many groups of 100 are there?

b. How many small blocks are there total?

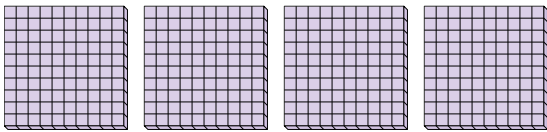


4a. 8

4b. 800

5) a. How many groups of 100 are there?

b. How many small blocks are there total?

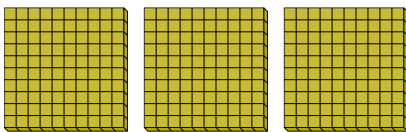


5a. 4

5b. 400

6) a. How many groups of 100 are there?

b. How many small blocks are there total?

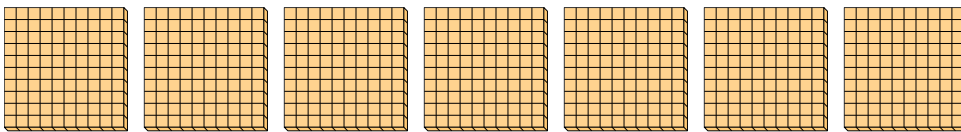


6a. 3

6b. 300

7) a. How many groups of 100 are there?

b. How many small blocks are there total?



7a. 7

7b. 700

**Answers**