

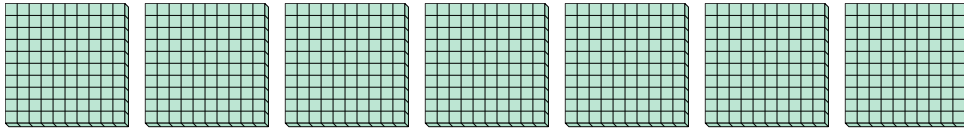


Use the groups to answer each question.

**Answers**

1) a. How many groups of 100 are there?

b. How many small blocks are there total?

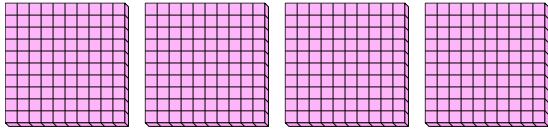


1a. \_\_\_\_\_

1b. \_\_\_\_\_

2) a. How many groups of 100 are there?

b. How many small blocks are there total?

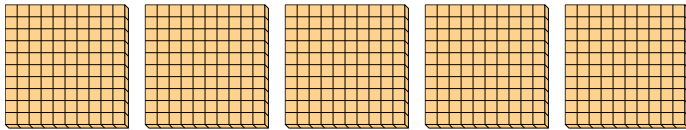


2a. \_\_\_\_\_

2b. \_\_\_\_\_

3) a. How many groups of 100 are there?

b. How many small blocks are there total?

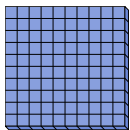


3a. \_\_\_\_\_

3b. \_\_\_\_\_

4) a. How many groups of 100 are there?

b. How many small blocks are there total?

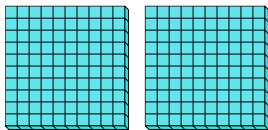


4a. \_\_\_\_\_

4b. \_\_\_\_\_

5) a. How many groups of 100 are there?

b. How many small blocks are there total?

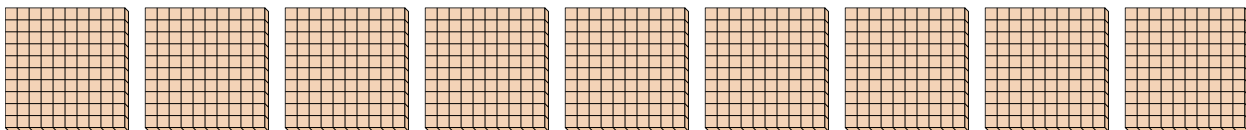


5a. \_\_\_\_\_

5b. \_\_\_\_\_

6) a. How many groups of 100 are there?

b. How many small blocks are there total?




6a. \_\_\_\_\_

6b. \_\_\_\_\_

7) a. How many groups of 100 are there?

b. How many small blocks are there total?



7a. \_\_\_\_\_

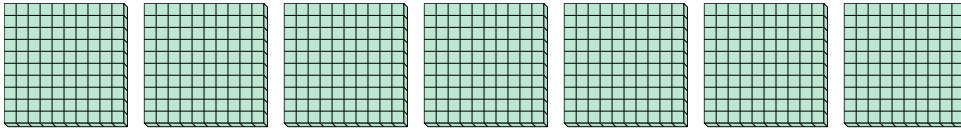
7b. \_\_\_\_\_



Use the groups to answer each question.

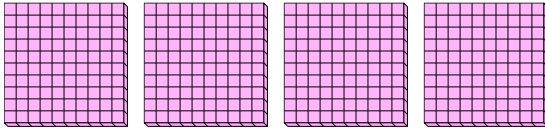
1) a. How many groups of 100 are there?

b. How many small blocks are there total?



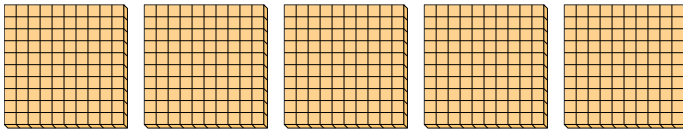
2) a. How many groups of 100 are there?

b. How many small blocks are there total?



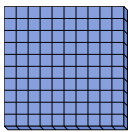
3) a. How many groups of 100 are there?

b. How many small blocks are there total?



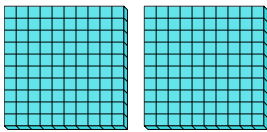
4) a. How many groups of 100 are there?

b. How many small blocks are there total?



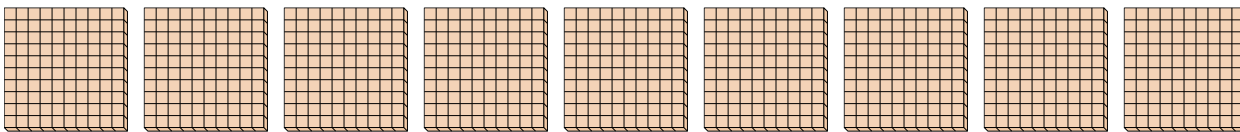
5) a. How many groups of 100 are there?

b. How many small blocks are there total?




6) a. How many groups of 100 are there?

b. How many small blocks are there total?



7) a. How many groups of 100 are there?

b. How many small blocks are there total?



**Answers**

1a. 7

1b. 700

2a. 4

2b. 400

3a. 5

3b. 500

4a. 1

4b. 100

5a. 2

5b. 200

6a. 9

6b. 900

7a. 3

7b. 300