

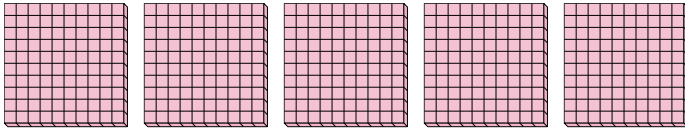


Use the groups to answer each question.

Answers

1) a. How many groups of 100 are there?

b. How many small blocks are there total?

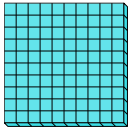


1a. _____

1b. _____

2) a. How many groups of 100 are there?

b. How many small blocks are there total?

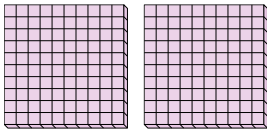


2a. _____

2b. _____

3) a. How many groups of 100 are there?

b. How many small blocks are there total?

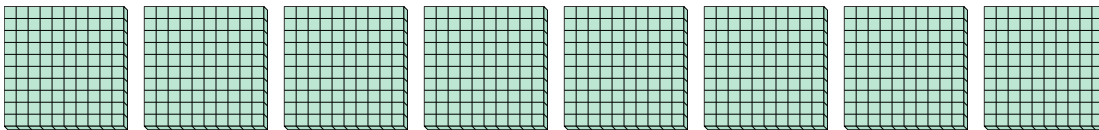


3a. _____

3b. _____

4) a. How many groups of 100 are there?

b. How many small blocks are there total?

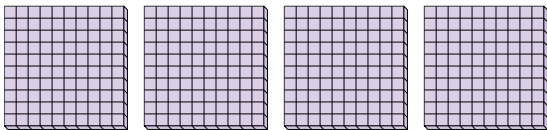


4a. _____

4b. _____

5) a. How many groups of 100 are there?

b. How many small blocks are there total?

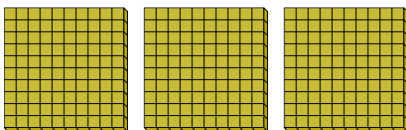


5a. _____

5b. _____

6) a. How many groups of 100 are there?

b. How many small blocks are there total?

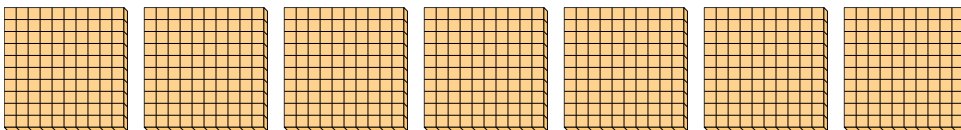


6a. _____

6b. _____

7) a. How many groups of 100 are there?

b. How many small blocks are there total?



7a. _____

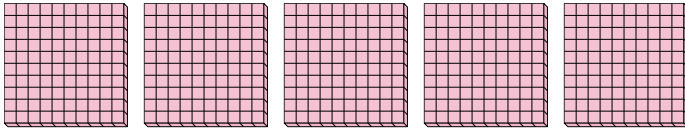
7b. _____



Use the groups to answer each question.

1) a. How many groups of 100 are there?

b. How many small blocks are there total?




1a. 5

1b. 500

2) a. How many groups of 100 are there?

b. How many small blocks are there total?

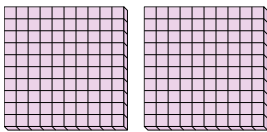


2a. 1

2b. 100

3) a. How many groups of 100 are there?

b. How many small blocks are there total?

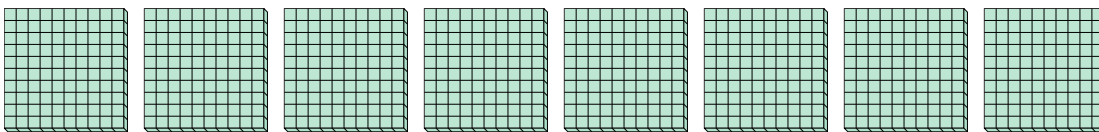


3a. 2

3b. 200

4) a. How many groups of 100 are there?

b. How many small blocks are there total?

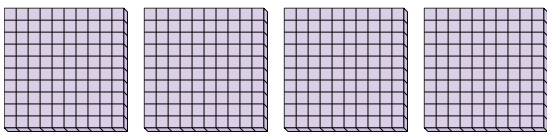


4a. 8

4b. 800

5) a. How many groups of 100 are there?

b. How many small blocks are there total?

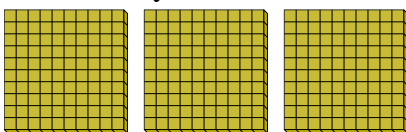


5a. 4

5b. 400

6) a. How many groups of 100 are there?

b. How many small blocks are there total?

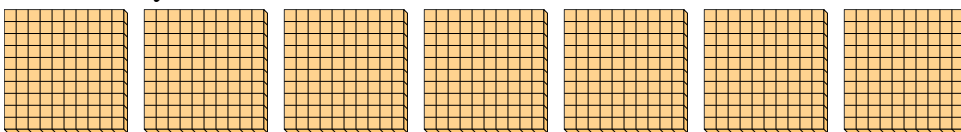


6a. 3

6b. 300

7) a. How many groups of 100 are there?

b. How many small blocks are there total?



7a. 7

7b. 700

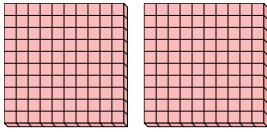
Answers



Use the groups to answer each question.

Answers

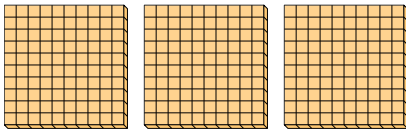
- 1) a. How many groups of 100 are there?
- b. How many small blocks are there total?



1a. _____

1b. _____


- 2) a. How many groups of 100 are there?
- b. How many small blocks are there total?



2a. _____

2b. _____

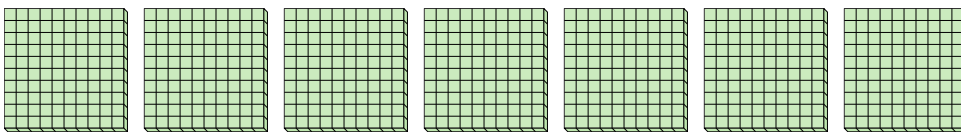
- 3) a. How many groups of 100 are there?
- b. How many small blocks are there total?



3a. _____

3b. _____


- 4) a. How many groups of 100 are there?
- b. How many small blocks are there total?



4a. _____

4b. _____

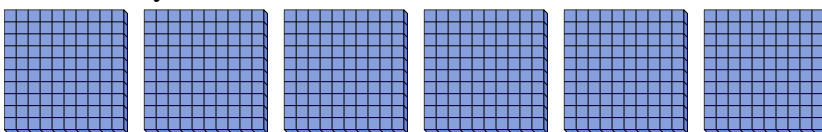
- 5) a. How many groups of 100 are there?
- b. How many small blocks are there total?



5a. _____

5b. _____

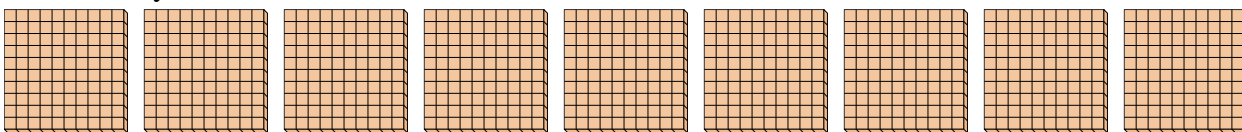
- 6) a. How many groups of 100 are there?
- b. How many small blocks are there total?



6a. _____

6b. _____

- 7) a. How many groups of 100 are there?
- b. How many small blocks are there total?



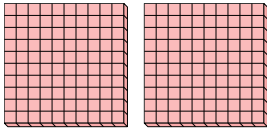
7a. _____

7b. _____

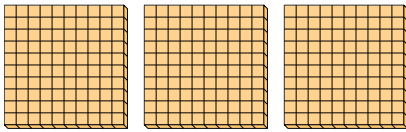


Use the groups to answer each question.

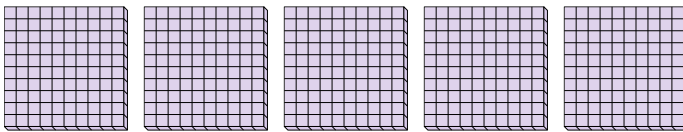
- 1) a. How many groups of 100 are there?
b. How many small blocks are there total?



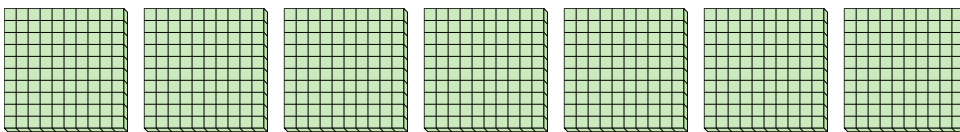
- 2) a. How many groups of 100 are there?
b. How many small blocks are there total?




- 3) a. How many groups of 100 are there?
b. How many small blocks are there total?



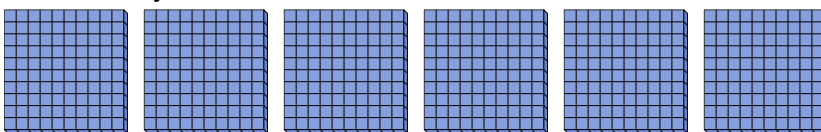
- 4) a. How many groups of 100 are there?
b. How many small blocks are there total?



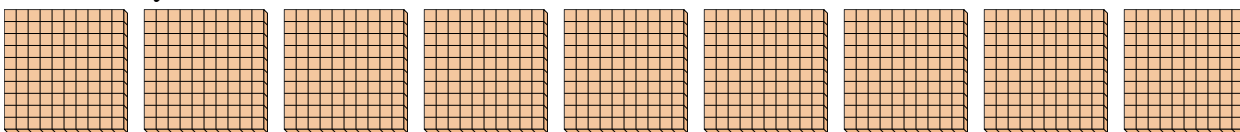
- 5) a. How many groups of 100 are there?
b. How many small blocks are there total?



- 6) a. How many groups of 100 are there?
b. How many small blocks are there total?



- 7) a. How many groups of 100 are there?
b. How many small blocks are there total?



Answers

1a. 2

1b. 200

2a. 3

2b. 300

3a. 5

3b. 500

4a. 7

4b. 700

5a. 8

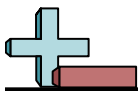
5b. 800

6a. 6

6b. 600

7a. 9

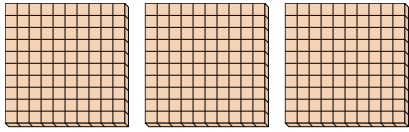
7b. 900



Use the groups to answer each question.

Answers

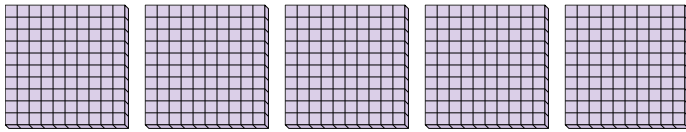
- 1) a. How many groups of 100 are there?
- b. How many small blocks are there total?



1a. _____

1b. _____

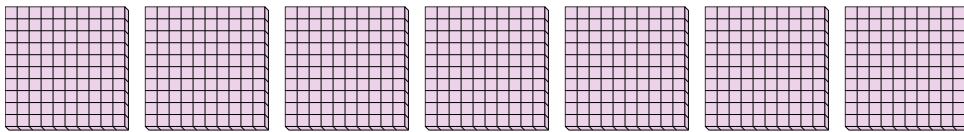
- 2) a. How many groups of 100 are there?
- b. How many small blocks are there total?



2a. _____

2b. _____

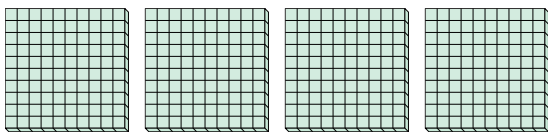
- 3) a. How many groups of 100 are there?
- b. How many small blocks are there total?



3a. _____

3b. _____


- 4) a. How many groups of 100 are there?
- b. How many small blocks are there total?



4a. _____

4b. _____


- 5) a. How many groups of 100 are there?
- b. How many small blocks are there total?



5a. _____

5b. _____

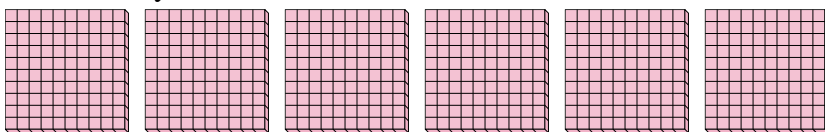
- 6) a. How many groups of 100 are there?
- b. How many small blocks are there total?



6a. _____

6b. _____

- 7) a. How many groups of 100 are there?
- b. How many small blocks are there total?



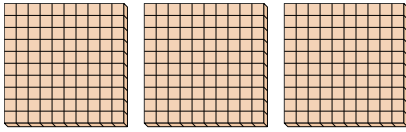
7a. _____

7b. _____




Use the groups to answer each question.

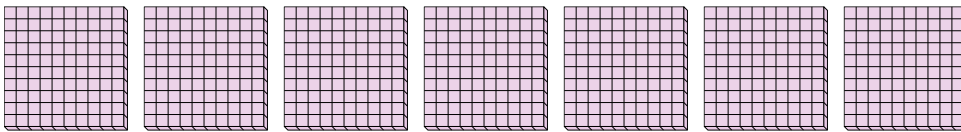
- 1) a. How many groups of 100 are there?
b. How many small blocks are there total?



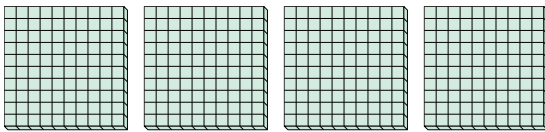
- 2) a. How many groups of 100 are there?
b. How many small blocks are there total?




- 3) a. How many groups of 100 are there?
b. How many small blocks are there total?




- 4) a. How many groups of 100 are there?
b. How many small blocks are there total?



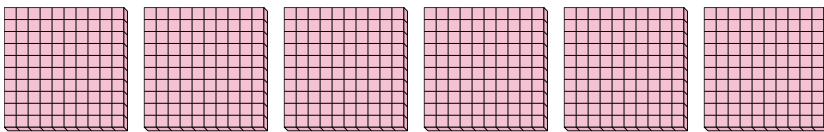
- 5) a. How many groups of 100 are there?
b. How many small blocks are there total?



- 6) a. How many groups of 100 are there?
b. How many small blocks are there total?



- 7) a. How many groups of 100 are there?
b. How many small blocks are there total?



Answers

1a. 3

1b. 300

2a. 5

2b. 500

3a. 7

3b. 700

4a. 4

4b. 400

5a. 9

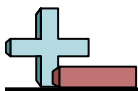
5b. 900

6a. 2

6b. 200

7a. 6

7b. 600

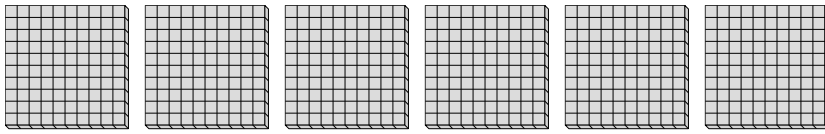


Use the groups to answer each question.

Answers

1) a. How many groups of 100 are there?

b. How many small blocks are there total?

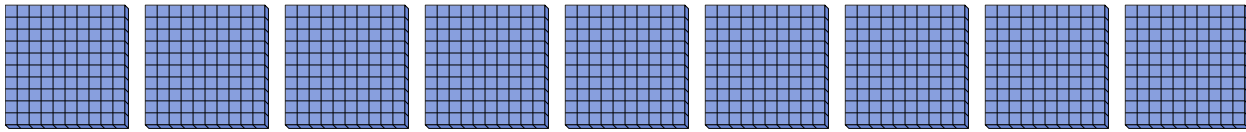


1a. _____

1b. _____

2) a. How many groups of 100 are there?

b. How many small blocks are there total?




2a. _____

2b. _____

3) a. How many groups of 100 are there?

b. How many small blocks are there total?

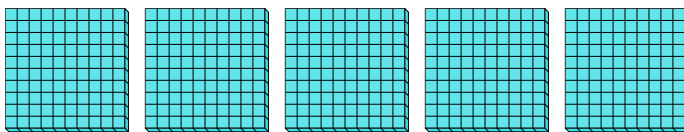


3a. _____

3b. _____

4) a. How many groups of 100 are there?

b. How many small blocks are there total?

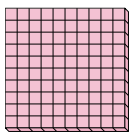


4a. _____

4b. _____

5) a. How many groups of 100 are there?

b. How many small blocks are there total?

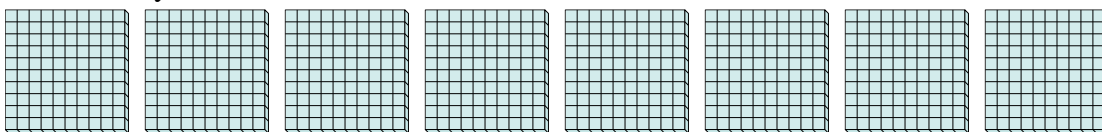


5a. _____

5b. _____

6) a. How many groups of 100 are there?

b. How many small blocks are there total?




6a. _____

6b. _____

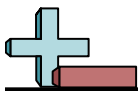
7) a. How many groups of 100 are there?

b. How many small blocks are there total?



7a. _____

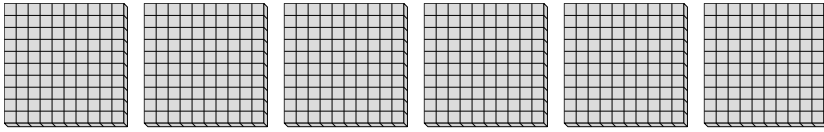
7b. _____



Use the groups to answer each question.

1) a. How many groups of 100 are there?

b. How many small blocks are there total?

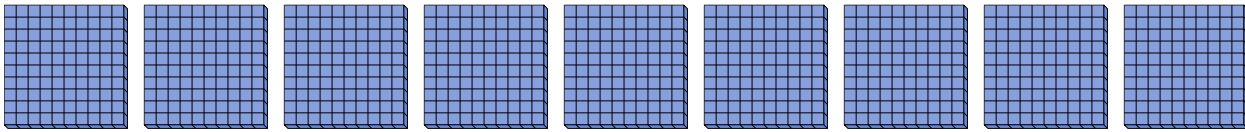


1a. 6

1b. 600

2) a. How many groups of 100 are there?

b. How many small blocks are there total?




2a. 9

2b. 900

3) a. How many groups of 100 are there?

b. How many small blocks are there total?

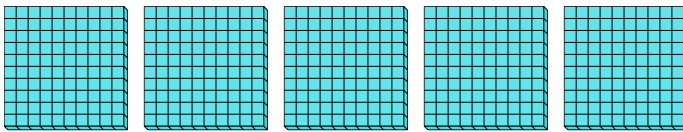


3a. 3

3b. 300

4) a. How many groups of 100 are there?

b. How many small blocks are there total?

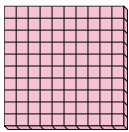


4a. 5

4b. 500

5) a. How many groups of 100 are there?

b. How many small blocks are there total?

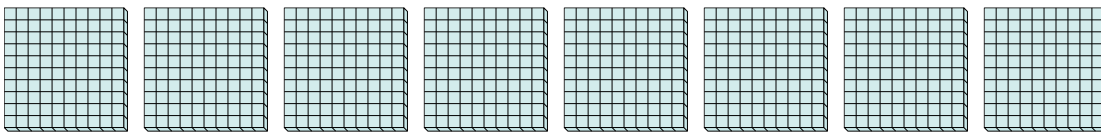


5a. 1

5b. 100

6) a. How many groups of 100 are there?

b. How many small blocks are there total?

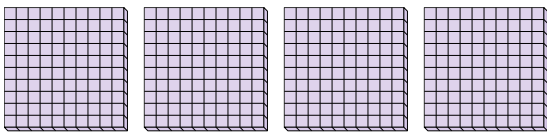


6a. 8

6b. 800

7) a. How many groups of 100 are there?

b. How many small blocks are there total?



7a. 4

7b. 400

Answers

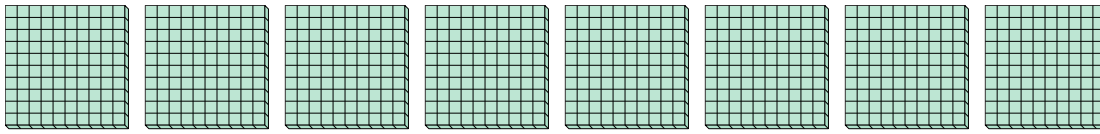


Use the groups to answer each question.

Answers

1) a. How many groups of 100 are there?

b. How many small blocks are there total?

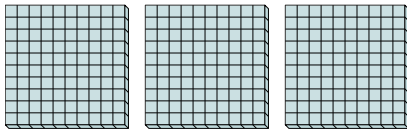


1a. _____

1b. _____

2) a. How many groups of 100 are there?

b. How many small blocks are there total?

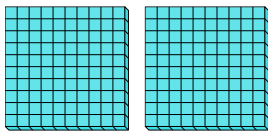


2a. _____

2b. _____

3) a. How many groups of 100 are there?

b. How many small blocks are there total?

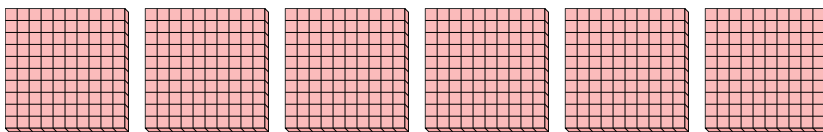


3a. _____

3b. _____

4) a. How many groups of 100 are there?

b. How many small blocks are there total?




4a. _____

4b. _____

5) a. How many groups of 100 are there?

b. How many small blocks are there total?




5a. _____

5b. _____

6) a. How many groups of 100 are there?

b. How many small blocks are there total?

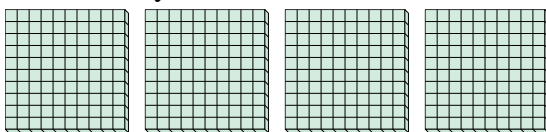


6a. _____

6b. _____

7) a. How many groups of 100 are there?

b. How many small blocks are there total?



7a. _____

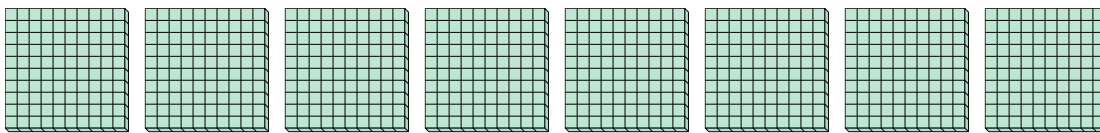
7b. _____



Use the groups to answer each question.

1) a. How many groups of 100 are there?

b. How many small blocks are there total?

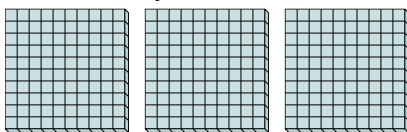


1a. 8

1b. 800

2) a. How many groups of 100 are there?

b. How many small blocks are there total?

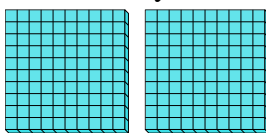


2a. 3

2b. 300

3) a. How many groups of 100 are there?

b. How many small blocks are there total?

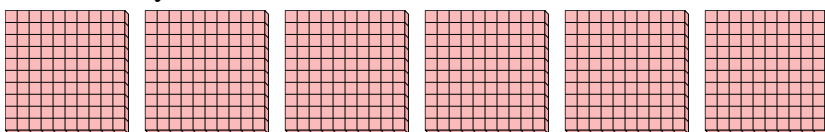


3a. 2

3b. 200

4) a. How many groups of 100 are there?

b. How many small blocks are there total?

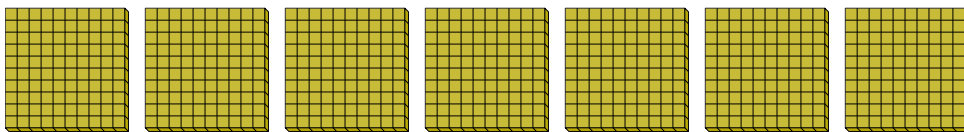


4a. 6

4b. 600

5) a. How many groups of 100 are there?

b. How many small blocks are there total?

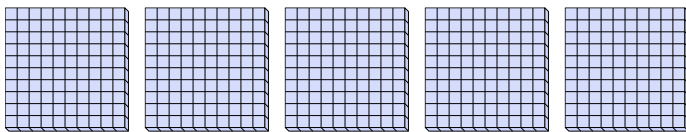


5a. 7

5b. 700

6) a. How many groups of 100 are there?

b. How many small blocks are there total?

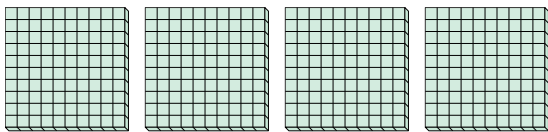


6a. 5

6b. 500

7) a. How many groups of 100 are there?

b. How many small blocks are there total?



7a. 4

7b. 400

Answers

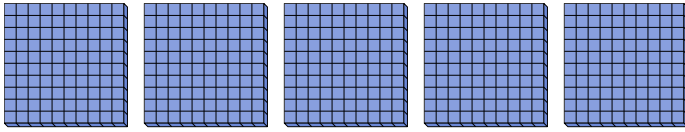


Use the groups to answer each question.

Answers

1) a. How many groups of 100 are there?

b. How many small blocks are there total?

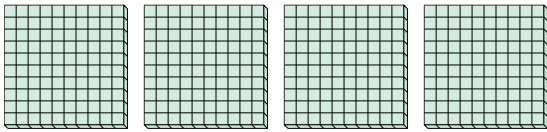


1a. _____

1b. _____

2) a. How many groups of 100 are there?

b. How many small blocks are there total?




2a. _____

2b. _____

3) a. How many groups of 100 are there?

b. How many small blocks are there total?

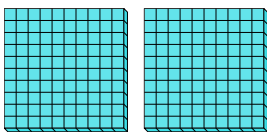


3a. _____

3b. _____

4) a. How many groups of 100 are there?

b. How many small blocks are there total?

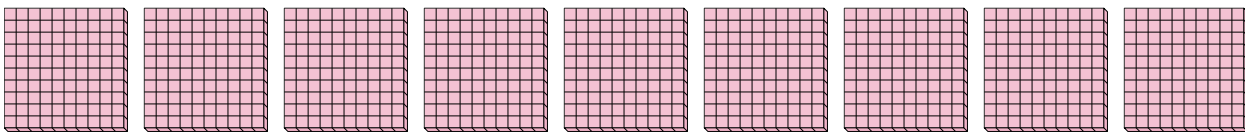


4a. _____

4b. _____

5) a. How many groups of 100 are there?

b. How many small blocks are there total?




5a. _____

5b. _____

6) a. How many groups of 100 are there?

b. How many small blocks are there total?

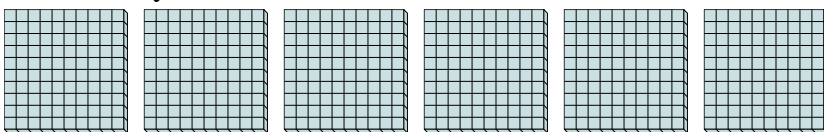


6a. _____

6b. _____

7) a. How many groups of 100 are there?

b. How many small blocks are there total?



7a. _____

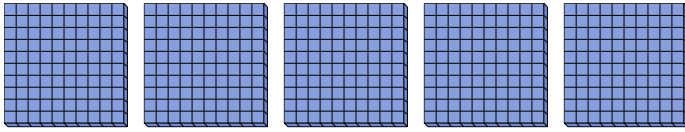
7b. _____



Use the groups to answer each question.

1) a. How many groups of 100 are there?

b. How many small blocks are there total?

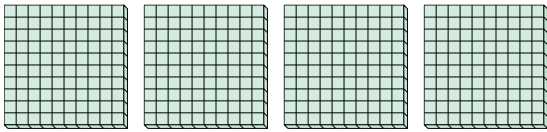


1a. 5

1b. 500

2) a. How many groups of 100 are there?

b. How many small blocks are there total?




2a. 4

2b. 400

3) a. How many groups of 100 are there?

b. How many small blocks are there total?

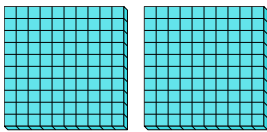


3a. 3

3b. 300

4) a. How many groups of 100 are there?

b. How many small blocks are there total?

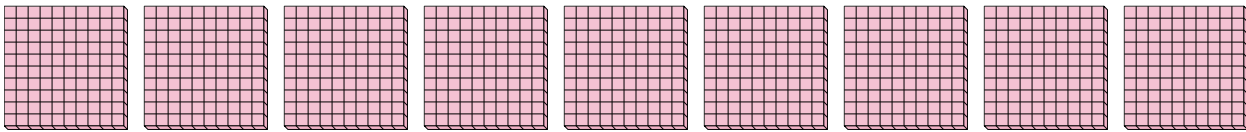


4a. 2

4b. 200

5) a. How many groups of 100 are there?

b. How many small blocks are there total?




5a. 9

5b. 900

6) a. How many groups of 100 are there?

b. How many small blocks are there total?

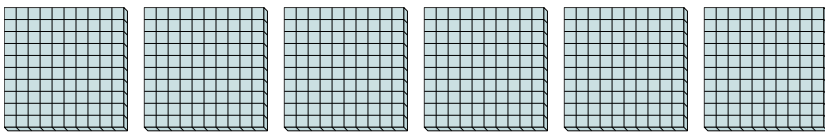


6a. 1

6b. 100

7) a. How many groups of 100 are there?

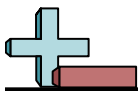
b. How many small blocks are there total?



7a. 6

7b. 600

Answers

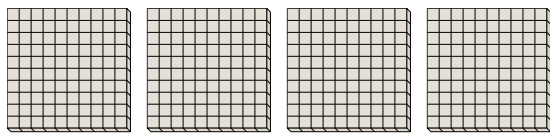


Use the groups to answer each question.

Answers

1) a. How many groups of 100 are there?

b. How many small blocks are there total?

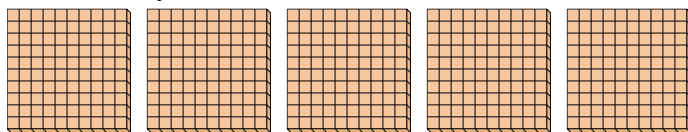


1a. _____

1b. _____

2) a. How many groups of 100 are there?

b. How many small blocks are there total?

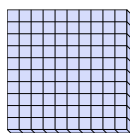


2a. _____

2b. _____

3) a. How many groups of 100 are there?

b. How many small blocks are there total?




3a. _____

3b. _____

4) a. How many groups of 100 are there?

b. How many small blocks are there total?



4a. _____


4b. _____

5a. _____

5b. _____

5) a. How many groups of 100 are there?

b. How many small blocks are there total?



6a. _____

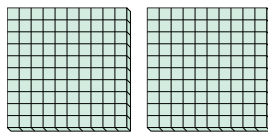
6b. _____

7a. _____

7b. _____

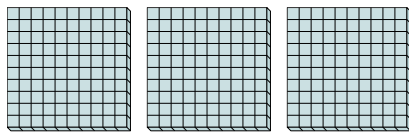
6) a. How many groups of 100 are there?

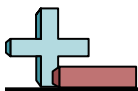
b. How many small blocks are there total?



7) a. How many groups of 100 are there?

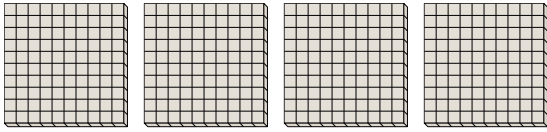
b. How many small blocks are there total?



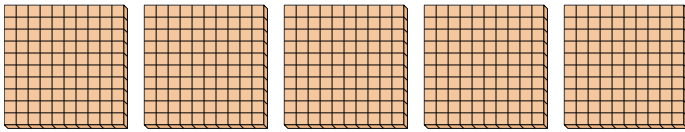


Use the groups to answer each question.


- 1) a. How many groups of 100 are there?
b. How many small blocks are there total?




- 2) a. How many groups of 100 are there?
b. How many small blocks are there total?



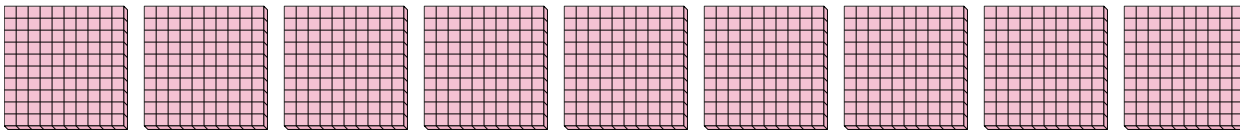
- 3) a. How many groups of 100 are there?
b. How many small blocks are there total?



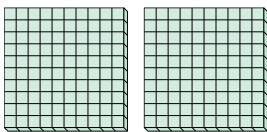
- 4) a. How many groups of 100 are there?
b. How many small blocks are there total?



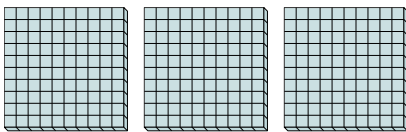
- 5) a. How many groups of 100 are there?
b. How many small blocks are there total?



- 6) a. How many groups of 100 are there?
b. How many small blocks are there total?



- 7) a. How many groups of 100 are there?
b. How many small blocks are there total?



Answers

1a. 4

1b. 400

2a. 5

2b. 500

3a. 1

3b. 100

4a. 8

4b. 800

5a. 9

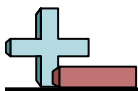
5b. 900

6a. 2

6b. 200

7a. 3

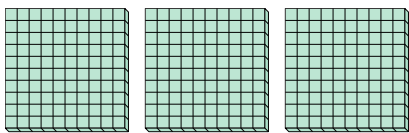
7b. 300



Use the groups to answer each question.

Answers

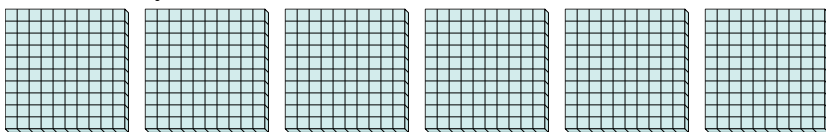
- 1) a. How many groups of 100 are there?
- b. How many small blocks are there total?



1a. _____

1b. _____

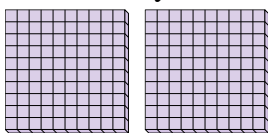
- 2) a. How many groups of 100 are there?
- b. How many small blocks are there total?



2a. _____

2b. _____


- 3) a. How many groups of 100 are there?
- b. How many small blocks are there total?



3a. _____

3b. _____

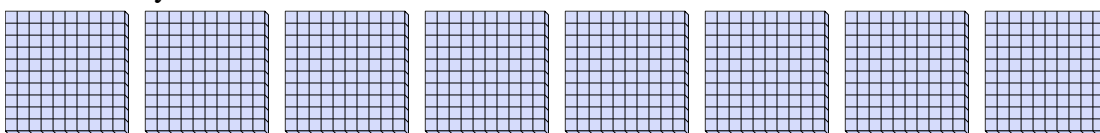
- 4) a. How many groups of 100 are there?
- b. How many small blocks are there total?



4a. _____

4b. _____


- 5) a. How many groups of 100 are there?
- b. How many small blocks are there total?



5a. _____

5b. _____

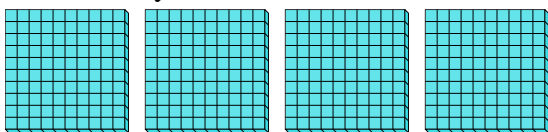
- 6) a. How many groups of 100 are there?
- b. How many small blocks are there total?



6a. _____

6b. _____

- 7) a. How many groups of 100 are there?
- b. How many small blocks are there total?




7a. _____

7b. _____

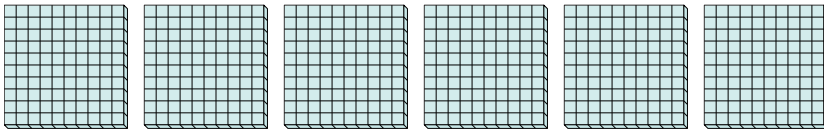


Use the groups to answer each question.

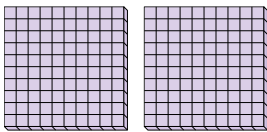
- 1) a. How many groups of 100 are there?
b. How many small blocks are there total?



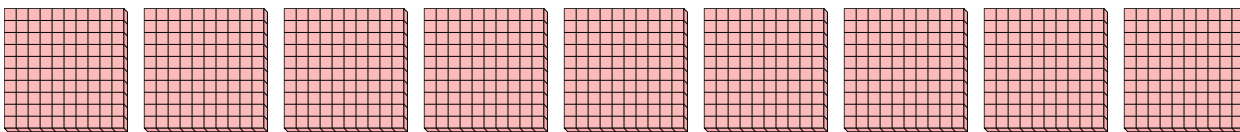
- 2) a. How many groups of 100 are there?
b. How many small blocks are there total?



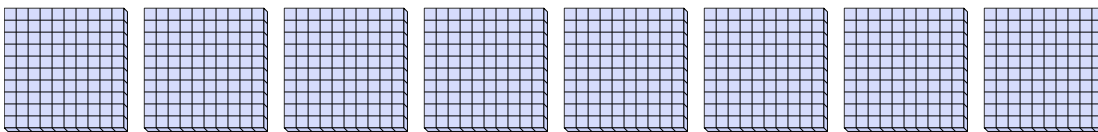
- 3) a. How many groups of 100 are there?
b. How many small blocks are there total?




- 4) a. How many groups of 100 are there?
b. How many small blocks are there total?



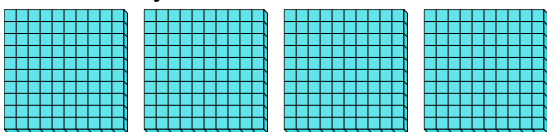
- 5) a. How many groups of 100 are there?
b. How many small blocks are there total?



- 6) a. How many groups of 100 are there?
b. How many small blocks are there total?



- 7) a. How many groups of 100 are there?
b. How many small blocks are there total?



Answers

1a. 3

1b. 300

2a. 6

2b. 600

3a. 2

3b. 200

4a. 9

4b. 900

5a. 8

5b. 800

6a. 1

6b. 100

7a. 4

7b. 400

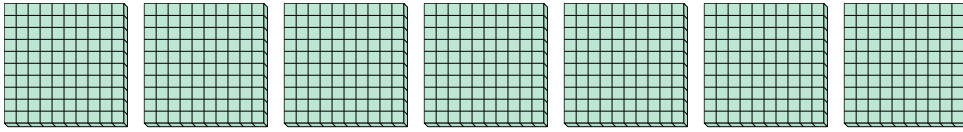


Use the groups to answer each question.

Answers

1) a. How many groups of 100 are there?

b. How many small blocks are there total?

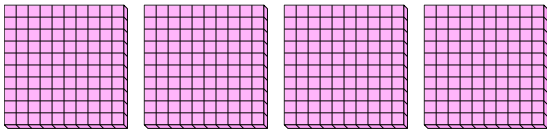


1a. _____

1b. _____

2) a. How many groups of 100 are there?

b. How many small blocks are there total?

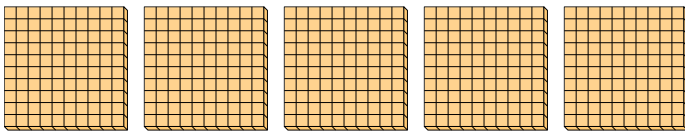


2a. _____

2b. _____

3) a. How many groups of 100 are there?

b. How many small blocks are there total?

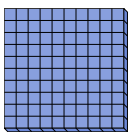


3a. _____

3b. _____

4) a. How many groups of 100 are there?

b. How many small blocks are there total?

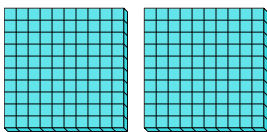


4a. _____

4b. _____

5) a. How many groups of 100 are there?

b. How many small blocks are there total?

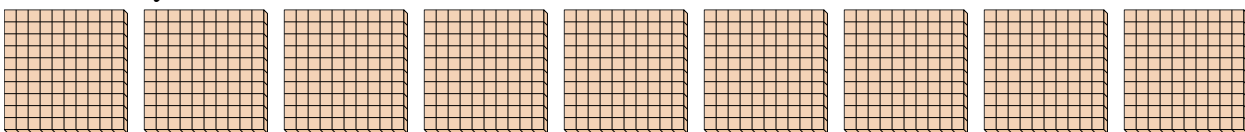


5a. _____

5b. _____

6) a. How many groups of 100 are there?

b. How many small blocks are there total?




6a. _____

6b. _____

7) a. How many groups of 100 are there?

b. How many small blocks are there total?



7a. _____

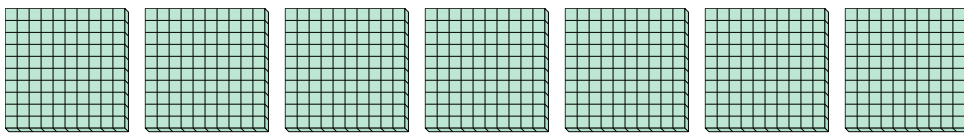
7b. _____



Use the groups to answer each question.

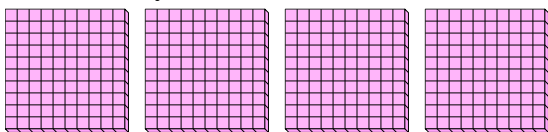
1) a. How many groups of 100 are there?

b. How many small blocks are there total?



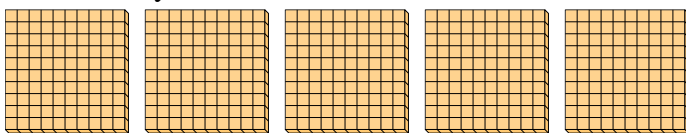
2) a. How many groups of 100 are there?

b. How many small blocks are there total?



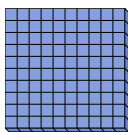
3) a. How many groups of 100 are there?

b. How many small blocks are there total?



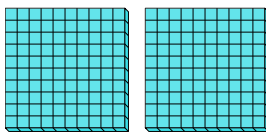
4) a. How many groups of 100 are there?

b. How many small blocks are there total?



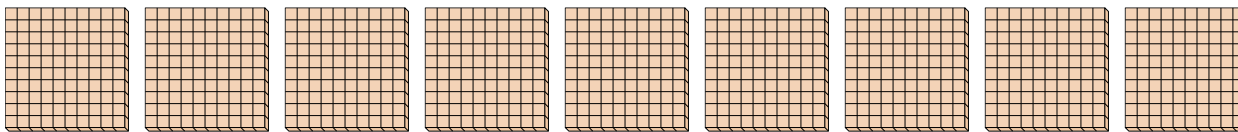
5) a. How many groups of 100 are there?

b. How many small blocks are there total?




6) a. How many groups of 100 are there?

b. How many small blocks are there total?



7) a. How many groups of 100 are there?

b. How many small blocks are there total?



Answers

1a. 7

1b. 700

2a. 4

2b. 400

3a. 5

3b. 500

4a. 1

4b. 100

5a. 2

5b. 200

6a. 9

6b. 900

7a. 3

7b. 300




Use the groups to answer each question.

Answers

1) a. How many groups of 100 are there?

b. How many small blocks are there total?

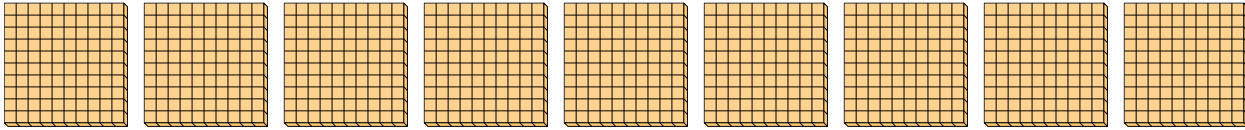


1a. _____

1b. _____

2) a. How many groups of 100 are there?

b. How many small blocks are there total?

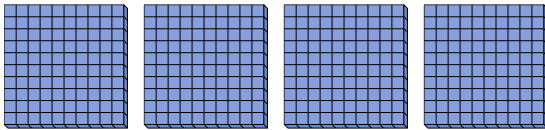


2a. _____

2b. _____

3) a. How many groups of 100 are there?

b. How many small blocks are there total?

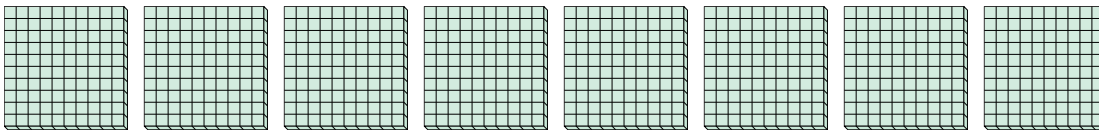


3a. _____

3b. _____

4) a. How many groups of 100 are there?

b. How many small blocks are there total?

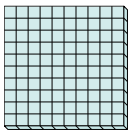


4a. _____

4b. _____

5) a. How many groups of 100 are there?

b. How many small blocks are there total?

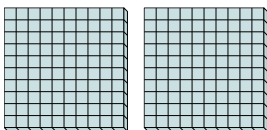


5a. _____

5b. _____

6) a. How many groups of 100 are there?

b. How many small blocks are there total?




6a. _____

6b. _____

7) a. How many groups of 100 are there?

b. How many small blocks are there total?



7a. _____

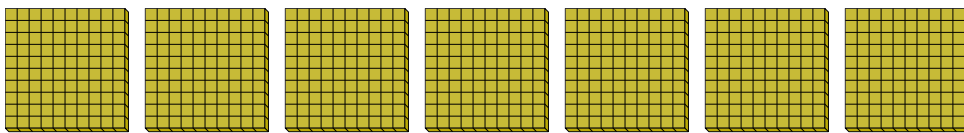
7b. _____



Use the groups to answer each question.

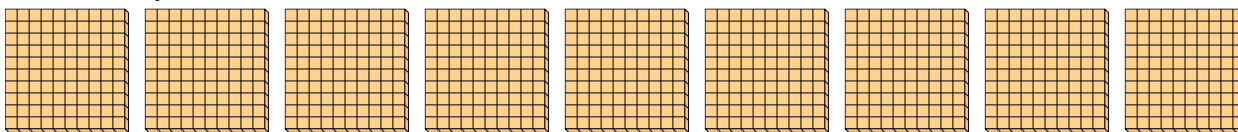
1) a. How many groups of 100 are there?

b. How many small blocks are there total?



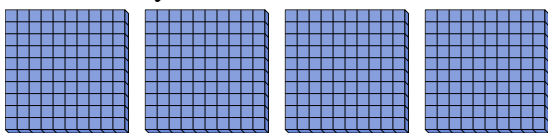
2) a. How many groups of 100 are there?

b. How many small blocks are there total?



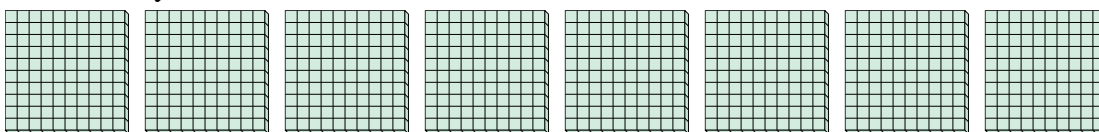
3) a. How many groups of 100 are there?

b. How many small blocks are there total?



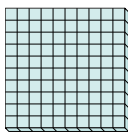
4) a. How many groups of 100 are there?

b. How many small blocks are there total?



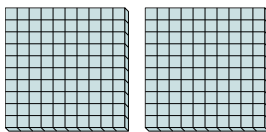
5) a. How many groups of 100 are there?

b. How many small blocks are there total?



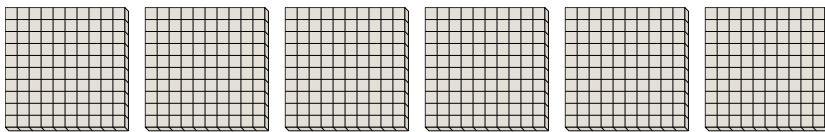
6) a. How many groups of 100 are there?

b. How many small blocks are there total?



7) a. How many groups of 100 are there?

b. How many small blocks are there total?



Answers

1a. 7

1b. 700

2a. 9

2b. 900

3a. 4

3b. 400

4a. 8

4b. 800

5a. 1

5b. 100

6a. 2

6b. 200

7a. 6

7b. 600