




Use the groups to answer each question.

Answers

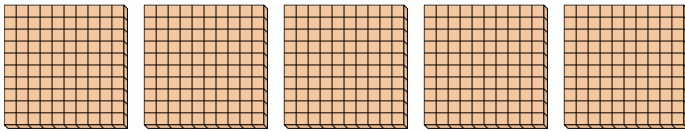
- 1) a. How many groups of 100 are there?
- b. How many small blocks are there total?



1a. _____

1b. _____

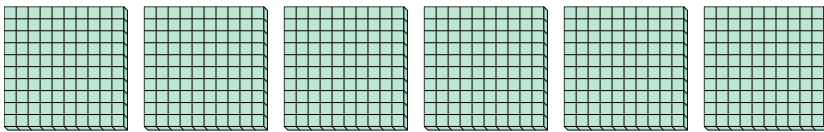
- 2) a. How many groups of 100 are there?
- b. How many small blocks are there total?



2a. _____

2b. _____

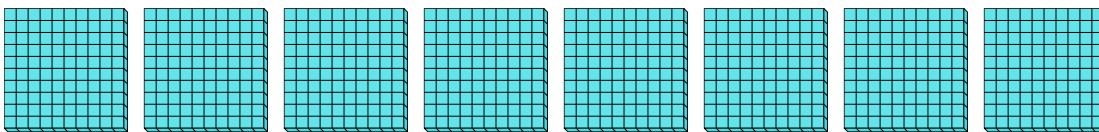
- 3) a. How many groups of 100 are there?
- b. How many small blocks are there total?



3a. _____

3b. _____

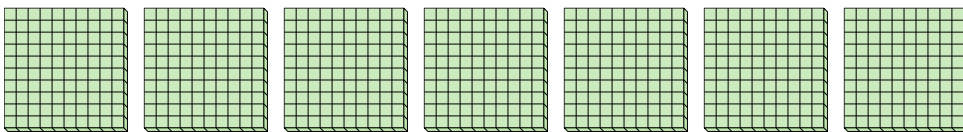
- 4) a. How many groups of 100 are there?
- b. How many small blocks are there total?



4a. _____

4b. _____

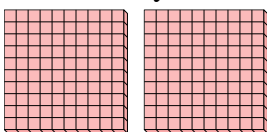
- 5) a. How many groups of 100 are there?
- b. How many small blocks are there total?



5a. _____

5b. _____

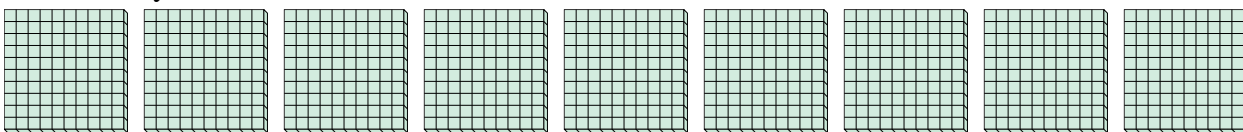
- 6) a. How many groups of 100 are there?
- b. How many small blocks are there total?



6a. _____

6b. _____

- 7) a. How many groups of 100 are there?
- b. How many small blocks are there total?



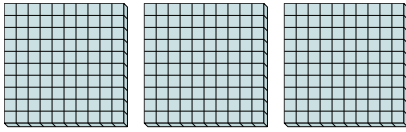
7a. _____

7b. _____

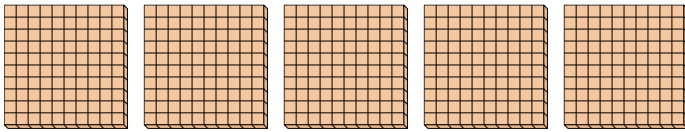


Use the groups to answer each question.

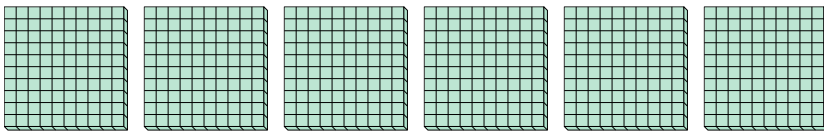
- 1) a. How many groups of 100 are there?
b. How many small blocks are there total?



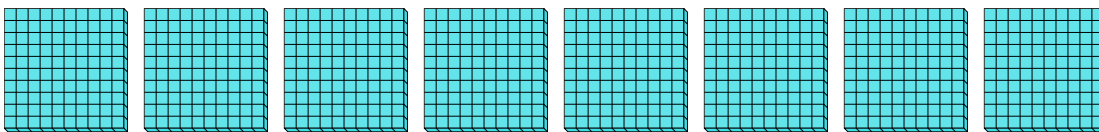
- 2) a. How many groups of 100 are there?
b. How many small blocks are there total?



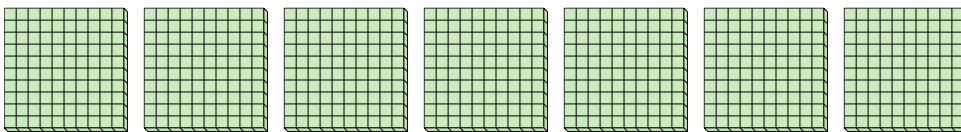
- 3) a. How many groups of 100 are there?
b. How many small blocks are there total?



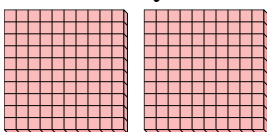
- 4) a. How many groups of 100 are there?
b. How many small blocks are there total?



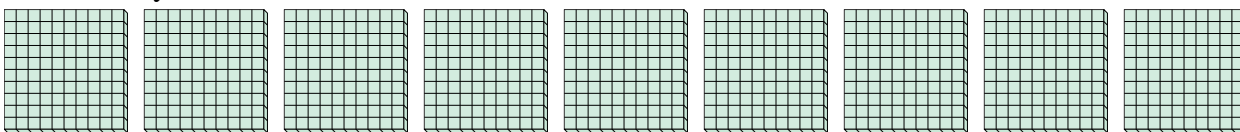
- 5) a. How many groups of 100 are there?
b. How many small blocks are there total?



- 6) a. How many groups of 100 are there?
b. How many small blocks are there total?



- 7) a. How many groups of 100 are there?
b. How many small blocks are there total?



Answers

1a. 3

1b. 300

2a. 5

2b. 500

3a. 6

3b. 600

4a. 8

4b. 800

5a. 7

5b. 700

6a. 2

6b. 200

7a. 9

7b. 900