



Determine which letter best represents the expression.

Answers

1) Divide 6 by B

A. $B \div 6$

B. $6 \div B$

2) Add 2 to C

A. $C + 2$

B. $2 + C$

1. _____

3) Add 6 to D

A. $6 + D$

B. $D + 6$

4) Take 18 from E

A. $E - 18$

B. $18 - E$

2. _____

5) Add 3 to F

A. $3 + F$

B. $F + 3$

6) Multiply 19 by G

A. $G \times 19$

B. $19 \times G$

3. _____

7) Multiply 11 by H

A. $11 \times H$

B. $H \times 11$

8) Find I times as much as 10

A. $10 \times I$

B. $I \times 10$

4. _____

9) Divide 12 by J

A. $12 \div J$

B. $J \div 12$

10) Divide 7 by K

A. $K \div 7$

B. $7 \div K$

5. _____

11) Give 10 to L

A. $L + 10$

B. $10 + L$

12) Subtract 7 from M

A. $M - 7$

B. $7 - M$

6. _____

13) Take 7 from N

A. $N - 7$

B. $7 - N$

14) Find O times as much as 7

A. $O \times 7$

B. $7 \times O$

7. _____

15) Give 3 to P

A. $P + 3$

B. $3 + P$

16) Add 1 to Q

A. $Q + 1$

B. $1 + Q$

8. _____

17) Find R times as much as 18

A. $18 \times R$

B. $R \times 18$

18) Divide 9 by S

A. $9 \div S$

B. $S \div 9$

9. _____

19) Subtract 19 from T

A. $T - 19$

B. $19 - T$

20) Divide 4 by U

A. $4 \div U$

B. $U \div 4$

10. _____

11. _____

12. _____

13. _____

14. _____

15. _____

16. _____

17. _____

18. _____

19. _____

20. _____



Determine which letter best represents the expression.

Answers

- | | | |
|---|--|------------------------------------|
| <p>1) Divide 6 by B
A. $B \div 6$
B. $6 \div B$</p> | <p>2) Add 2 to C
A. $C + 2$
B. $2 + C$</p> | <p>1. <u> B </u></p> |
| <p>3) Add 6 to D
A. $6 + D$
B. $D + 6$</p> | <p>4) Take 18 from E
A. $E - 18$
B. $18 - E$</p> | <p>2. <u> A </u></p> |
| <p>5) Add 3 to F
A. $3 + F$
B. $F + 3$</p> | <p>6) Multiply 19 by G
A. $G \times 19$
B. $19 \times G$</p> | <p>3. <u> B </u></p> |
| <p>7) Multiply 11 by H
A. $11 \times H$
B. $H \times 11$</p> | <p>8) Find I times as much as 10
A. $10 \times I$
B. $I \times 10$</p> | <p>4. <u> A </u></p> |
| <p>9) Divide 12 by J
A. $12 \div J$
B. $J \div 12$</p> | <p>10) Divide 7 by K
A. $K \div 7$
B. $7 \div K$</p> | <p>5. <u> B </u></p> |
| <p>11) Give 10 to L
A. $L + 10$
B. $10 + L$</p> | <p>12) Subtract 7 from M
A. $M - 7$
B. $7 - M$</p> | <p>6. <u> B </u></p> |
| <p>13) Take 7 from N
A. $N - 7$
B. $7 - N$</p> | <p>14) Find O times as much as 7
A. $O \times 7$
B. $7 \times O$</p> | <p>7. <u> A </u></p> |
| <p>15) Give 3 to P
A. $P + 3$
B. $3 + P$</p> | <p>16) Add 1 to Q
A. $Q + 1$
B. $1 + Q$</p> | <p>8. <u> A </u></p> |
| <p>17) Find R times as much as 18
A. $18 \times R$
B. $R \times 18$</p> | <p>18) Divide 9 by S
A. $9 \div S$
B. $S \div 9$</p> | <p>9. <u> A </u></p> |
| <p>19) Subtract 19 from T
A. $T - 19$
B. $19 - T$</p> | <p>20) Divide 4 by U
A. $4 \div U$
B. $U \div 4$</p> | <p>10. <u> A </u></p> |
| | | <p>11. <u> A </u></p> |
| | | <p>12. <u> A </u></p> |
| | | <p>13. <u> A </u></p> |
| | | <p>14. <u> B </u></p> |
| | | <p>15. <u> A </u></p> |
| | | <p>16. <u> A </u></p> |
| | | <p>17. <u> A </u></p> |
| | | <p>18. <u> A </u></p> |
| | | <p>19. <u> A </u></p> |
| | | <p>20. <u> A </u></p> |



Determine which letter best represents the expression.

Answers

- 1) Give 10 to B
 A. $B + 10$
 B. $10 + B$

- 2) Subtract 14 from C
 A. $C - 14$
 B. $14 - C$

1. _____

2. _____

- 3) Take 17 from D
 A. $D - 17$
 B. $17 - D$

- 4) Give 15 to E
 A. $15 + E$
 B. $E + 15$

3. _____

4. _____

- 5) Subtract 7 from F
 A. $F - 7$
 B. $7 - F$

- 6) Multiply 11 by G
 A. $G \times 11$
 B. $11 \times G$

5. _____

6. _____

- 7) Divide 6 by H
 A. $H \div 6$
 B. $6 \div H$

- 8) Divide 14 by I
 A. $I \div 14$
 B. $14 \div I$

7. _____

8. _____

- 9) Multiply 9 by J
 A. $J \times 9$
 B. $9 \times J$

- 10) Multiply 15 by K
 A. $15 \times K$
 B. $K \times 15$

9. _____

10. _____

- 11) Subtract 2 from L
 A. $2 - L$
 B. $L - 2$

- 12) Divide 18 by M
 A. $18 \div M$
 B. $M \div 18$

11. _____

12. _____

- 13) Take 5 from N
 A. $N - 5$
 B. $5 - N$

- 14) Give 18 to O
 A. $O + 18$
 B. $18 + O$

13. _____

14. _____

- 15) Multiply 8 by P
 A. $8 \times P$
 B. $P \times 8$

- 16) Subtract 14 from Q
 A. $Q - 14$
 B. $14 - Q$

15. _____

16. _____

- 17) Find R times as much as 20
 A. $20 \times R$
 B. $R \times 20$

- 18) Add 11 to S
 A. $S + 11$
 B. $11 + S$

17. _____

18. _____

- 19) Take 7 from T
 A. $T - 7$
 B. $7 - T$

- 20) Subtract 19 from U
 A. $19 - U$
 B. $U - 19$

19. _____

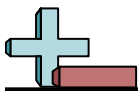
20. _____



Determine which letter best represents the expression.

Answers

- | | | |
|---|---|------------------------------------|
| <p>1) Give 10 to B
A. $B + 10$
B. $10 + B$</p> | <p>2) Subtract 14 from C
A. $C - 14$
B. $14 - C$</p> | <p>1. <u> A </u></p> |
| <p>3) Take 17 from D
A. $D - 17$
B. $17 - D$</p> | <p>4) Give 15 to E
A. $15 + E$
B. $E + 15$</p> | <p>2. <u> A </u></p> |
| <p>5) Subtract 7 from F
A. $F - 7$
B. $7 - F$</p> | <p>6) Multiply 11 by G
A. $G \times 11$
B. $11 \times G$</p> | <p>3. <u> A </u></p> |
| <p>7) Divide 6 by H
A. $H \div 6$
B. $6 \div H$</p> | <p>8) Divide 14 by I
A. $I \div 14$
B. $14 \div I$</p> | <p>4. <u> B </u></p> |
| <p>9) Multiply 9 by J
A. $J \times 9$
B. $9 \times J$</p> | <p>10) Multiply 15 by K
A. $15 \times K$
B. $K \times 15$</p> | <p>5. <u> A </u></p> |
| <p>11) Subtract 2 from L
A. $2 - L$
B. $L - 2$</p> | <p>12) Divide 18 by M
A. $18 \div M$
B. $M \div 18$</p> | <p>6. <u> B </u></p> |
| <p>13) Take 5 from N
A. $N - 5$
B. $5 - N$</p> | <p>14) Give 18 to O
A. $O + 18$
B. $18 + O$</p> | <p>7. <u> B </u></p> |
| <p>15) Multiply 8 by P
A. $8 \times P$
B. $P \times 8$</p> | <p>16) Subtract 14 from Q
A. $Q - 14$
B. $14 - Q$</p> | <p>8. <u> B </u></p> |
| <p>17) Find R times as much as 20
A. $20 \times R$
B. $R \times 20$</p> | <p>18) Add 11 to S
A. $S + 11$
B. $11 + S$</p> | <p>9. <u> B </u></p> |
| <p>19) Take 7 from T
A. $T - 7$
B. $7 - T$</p> | <p>20) Subtract 19 from U
A. $19 - U$
B. $U - 19$</p> | <p>10. <u> A </u></p> |
| | | <p>11. <u> B </u></p> |
| | | <p>12. <u> A </u></p> |
| | | <p>13. <u> A </u></p> |
| | | <p>14. <u> A </u></p> |
| | | <p>15. <u> A </u></p> |
| | | <p>16. <u> A </u></p> |
| | | <p>17. <u> A </u></p> |
| | | <p>18. <u> A </u></p> |
| | | <p>19. <u> A </u></p> |
| | | <p>20. <u> B </u></p> |



Determine which letter best represents the expression.

Answers

- 1) Take 18 from B
A. $18 - B$
B. $B - 18$

- 2) Subtract 3 from C
A. $C - 3$
B. $3 - C$

- 3) Give 17 to D
A. $17 + D$
B. $D + 17$

- 4) Divide 7 by E
A. $E \div 7$
B. $7 \div E$

- 5) Take 16 from F
A. $F - 16$
B. $16 - F$

- 6) Take 5 from G
A. $G - 5$
B. $5 - G$

- 7) Find H times as much as 14
A. $14 \times H$
B. $H \times 14$

- 8) Subtract 5 from I
A. $5 - I$
B. $I - 5$

- 9) Give 11 to J
A. $J + 11$
B. $11 + J$

- 10) Divide 9 by K
A. $9 \div K$
B. $K \div 9$

- 11) Take 10 from L
A. $L - 10$
B. $10 - L$

- 12) Subtract 11 from M
A. $M - 11$
B. $11 - M$

- 13) Take 2 from N
A. $2 - N$
B. $N - 2$

- 14) Take 20 from O
A. $20 - O$
B. $O - 20$

- 15) Divide 12 by P
A. $P \div 12$
B. $12 \div P$

- 16) Take 15 from Q
A. $Q - 15$
B. $15 - Q$

- 17) Divide 1 by R
A. $R \div 1$
B. $1 \div R$

- 18) Give 9 to S
A. $S + 9$
B. $9 + S$

- 19) Give 12 to T
A. $12 + T$
B. $T + 12$

- 20) Divide 12 by U
A. $12 \div U$
B. $U \div 12$

1. _____

2. _____

3. _____

4. _____

5. _____

6. _____

7. _____

8. _____

9. _____

10. _____

11. _____

12. _____

13. _____

14. _____

15. _____

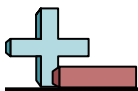
16. _____

17. _____

18. _____

19. _____

20. _____



Determine which letter best represents the expression.

Answers

- | | | |
|--|---|------------------------------------|
| <p>1) Take 18 from B
A. $18 - B$
B. $B - 18$</p> | <p>2) Subtract 3 from C
A. $C - 3$
B. $3 - C$</p> | <p>1. <u> B </u></p> |
| <p>3) Give 17 to D
A. $17 + D$
B. $D + 17$</p> | <p>4) Divide 7 by E
A. $E \div 7$
B. $7 \div E$</p> | <p>2. <u> A </u></p> |
| <p>5) Take 16 from F
A. $F - 16$
B. $16 - F$</p> | <p>6) Take 5 from G
A. $G - 5$
B. $5 - G$</p> | <p>3. <u> B </u></p> |
| <p>7) Find H times as much as 14
A. $14 \times H$
B. $H \times 14$</p> | <p>8) Subtract 5 from I
A. $5 - I$
B. $I - 5$</p> | <p>4. <u> B </u></p> |
| <p>9) Give 11 to J
A. $J + 11$
B. $11 + J$</p> | <p>10) Divide 9 by K
A. $9 \div K$
B. $K \div 9$</p> | <p>5. <u> A </u></p> |
| <p>11) Take 10 from L
A. $L - 10$
B. $10 - L$</p> | <p>12) Subtract 11 from M
A. $M - 11$
B. $11 - M$</p> | <p>6. <u> A </u></p> |
| <p>13) Take 2 from N
A. $2 - N$
B. $N - 2$</p> | <p>14) Take 20 from O
A. $20 - O$
B. $O - 20$</p> | <p>7. <u> A </u></p> |
| <p>15) Divide 12 by P
A. $P \div 12$
B. $12 \div P$</p> | <p>16) Take 15 from Q
A. $Q - 15$
B. $15 - Q$</p> | <p>8. <u> B </u></p> |
| <p>17) Divide 1 by R
A. $R \div 1$
B. $1 \div R$</p> | <p>18) Give 9 to S
A. $S + 9$
B. $9 + S$</p> | <p>9. <u> A </u></p> |
| <p>19) Give 12 to T
A. $12 + T$
B. $T + 12$</p> | <p>20) Divide 12 by U
A. $12 \div U$
B. $U \div 12$</p> | <p>10. <u> A </u></p> |
| | | <p>11. <u> A </u></p> |
| | | <p>12. <u> A </u></p> |
| | | <p>13. <u> B </u></p> |
| | | <p>14. <u> B </u></p> |
| | | <p>15. <u> B </u></p> |
| | | <p>16. <u> A </u></p> |
| | | <p>17. <u> B </u></p> |
| | | <p>18. <u> A </u></p> |
| | | <p>19. <u> B </u></p> |
| | | <p>20. <u> A </u></p> |



Determine which letter best represents the expression.

Answers

- 1) Add 2 to B
A. $2 + B$
B. $B + 2$

- 2) Give 9 to C
A. $9 + C$
B. $C + 9$

- 3) Take 7 from D
A. $7 - D$
B. $D - 7$

- 4) Find E times as much as 7
A. $7 \times E$
B. $E \times 7$

- 5) Take 11 from F
A. $11 - F$
B. $F - 11$

- 6) Multiply 13 by G
A. $G \times 13$
B. $13 \times G$

- 7) Add 9 to H
A. $H + 9$
B. $9 + H$

- 8) Find I times as much as 16
A. $16 \times I$
B. $I \times 16$

- 9) Give 12 to J
A. $12 + J$
B. $J + 12$

- 10) Give 5 to K
A. $K + 5$
B. $5 + K$

- 11) Divide 14 by L
A. $14 \div L$
B. $L \div 14$

- 12) Divide 15 by M
A. $M \div 15$
B. $15 \div M$

- 13) Divide 10 by N
A. $N \div 10$
B. $10 \div N$

- 14) Subtract 1 from O
A. $O - 1$
B. $1 - O$

- 15) Add 15 to P
A. $15 + P$
B. $P + 15$

- 16) Add 17 to Q
A. $Q + 17$
B. $17 + Q$

- 17) Divide 7 by R
A. $R \div 7$
B. $7 \div R$

- 18) Take 7 from S
A. $7 - S$
B. $S - 7$

- 19) Divide 9 by T
A. $9 \div T$
B. $T \div 9$

- 20) Divide 7 by U
A. $U \div 7$
B. $7 \div U$

1. _____

2. _____

3. _____

4. _____

5. _____

6. _____

7. _____

8. _____

9. _____

10. _____

11. _____

12. _____

13. _____

14. _____

15. _____

16. _____

17. _____

18. _____

19. _____

20. _____



Determine which letter best represents the expression.

Answers

- | | | | |
|---|--|-----|----------|
| <p>1) Add 2 to B
A. $2 + B$
B. $B + 2$</p> | <p>2) Give 9 to C
A. $9 + C$
B. $C + 9$</p> | 1. | B |
| | | 2. | B |
| <p>3) Take 7 from D
A. $7 - D$
B. $D - 7$</p> | <p>4) Find E times as much as 7
A. $7 \times E$
B. $E \times 7$</p> | 3. | B |
| | | 4. | A |
| <p>5) Take 11 from F
A. $11 - F$
B. $F - 11$</p> | <p>6) Multiply 13 by G
A. $G \times 13$
B. $13 \times G$</p> | 5. | B |
| | | 6. | B |
| <p>7) Add 9 to H
A. $H + 9$
B. $9 + H$</p> | <p>8) Find I times as much as 16
A. $16 \times I$
B. $I \times 16$</p> | 7. | A |
| | | 8. | A |
| <p>9) Give 12 to J
A. $12 + J$
B. $J + 12$</p> | <p>10) Give 5 to K
A. $K + 5$
B. $5 + K$</p> | 9. | B |
| | | 10. | A |
| <p>11) Divide 14 by L
A. $14 \div L$
B. $L \div 14$</p> | <p>12) Divide 15 by M
A. $M \div 15$
B. $15 \div M$</p> | 11. | A |
| | | 12. | B |
| <p>13) Divide 10 by N
A. $N \div 10$
B. $10 \div N$</p> | <p>14) Subtract 1 from O
A. $O - 1$
B. $1 - O$</p> | 13. | B |
| | | 14. | A |
| <p>15) Add 15 to P
A. $15 + P$
B. $P + 15$</p> | <p>16) Add 17 to Q
A. $Q + 17$
B. $17 + Q$</p> | 15. | B |
| | | 16. | A |
| <p>17) Divide 7 by R
A. $R \div 7$
B. $7 \div R$</p> | <p>18) Take 7 from S
A. $7 - S$
B. $S - 7$</p> | 17. | B |
| | | 18. | B |
| <p>19) Divide 9 by T
A. $9 \div T$
B. $T \div 9$</p> | <p>20) Divide 7 by U
A. $U \div 7$
B. $7 \div U$</p> | 19. | A |
| | | 20. | B |



Determine which letter best represents the expression.

Answers

1) Take 8 from B

A. $B - 8$

B. $8 - B$

2) Add 10 to C

A. $C + 10$

B. $10 + C$

1. _____

2. _____

3) Add 5 to D

A. $5 + D$

B. $D + 5$

4) Multiply 10 by E

A. $10 \times E$

B. $E \times 10$

3. _____

4. _____

5) Take 17 from F

A. $17 - F$

B. $F - 17$

6) Multiply 4 by G

A. $4 \times G$

B. $G \times 4$

5. _____

6. _____

7) Multiply 20 by H

A. $20 \times H$

B. $H \times 20$

8) Add 20 to I

A. $I + 20$

B. $20 + I$

7. _____

8. _____

9) Divide 13 by J

A. $J \div 13$

B. $13 \div J$

10) Add 13 to K

A. $13 + K$

B. $K + 13$

9. _____

10. _____

11) Give 3 to L

A. $L + 3$

B. $3 + L$

12) Add 16 to M

A. $M + 16$

B. $16 + M$

11. _____

12. _____

13) Take 13 from N

A. $13 - N$

B. $N - 13$

14) Add 14 to O

A. $O + 14$

B. $14 + O$

13. _____

14. _____

15) Divide 4 by P

A. $P \div 4$

B. $4 \div P$

16) Add 14 to Q

A. $Q + 14$

B. $14 + Q$

15. _____

16. _____

17) Give 4 to R

A. $4 + R$

B. $R + 4$

18) Take 1 from S

A. $1 - S$

B. $S - 1$

17. _____

18. _____

19) Add 4 to T

A. $T + 4$

B. $4 + T$

20) Give 10 to U

A. $10 + U$

B. $U + 10$

19. _____

20. _____



Determine which letter best represents the expression.

Answers

- | | | |
|--|--|------------------------------------|
| <p>1) Take 8 from B
A. $B - 8$
B. $8 - B$</p> | <p>2) Add 10 to C
A. $C + 10$
B. $10 + C$</p> | <p>1. <u> A </u></p> |
| <p>3) Add 5 to D
A. $5 + D$
B. $D + 5$</p> | <p>4) Multiply 10 by E
A. $10 \times E$
B. $E \times 10$</p> | <p>2. <u> A </u></p> |
| <p>5) Take 17 from F
A. $17 - F$
B. $F - 17$</p> | <p>6) Multiply 4 by G
A. $4 \times G$
B. $G \times 4$</p> | <p>3. <u> B </u></p> |
| <p>7) Multiply 20 by H
A. $20 \times H$
B. $H \times 20$</p> | <p>8) Add 20 to I
A. $I + 20$
B. $20 + I$</p> | <p>4. <u> A </u></p> |
| <p>9) Divide 13 by J
A. $J \div 13$
B. $13 \div J$</p> | <p>10) Add 13 to K
A. $13 + K$
B. $K + 13$</p> | <p>5. <u> B </u></p> |
| <p>11) Give 3 to L
A. $L + 3$
B. $3 + L$</p> | <p>12) Add 16 to M
A. $M + 16$
B. $16 + M$</p> | <p>6. <u> A </u></p> |
| <p>13) Take 13 from N
A. $13 - N$
B. $N - 13$</p> | <p>14) Add 14 to O
A. $O + 14$
B. $14 + O$</p> | <p>7. <u> A </u></p> |
| <p>15) Divide 4 by P
A. $P \div 4$
B. $4 \div P$</p> | <p>16) Add 14 to Q
A. $Q + 14$
B. $14 + Q$</p> | <p>8. <u> A </u></p> |
| <p>17) Give 4 to R
A. $4 + R$
B. $R + 4$</p> | <p>18) Take 1 from S
A. $1 - S$
B. $S - 1$</p> | <p>9. <u> B </u></p> |
| <p>19) Add 4 to T
A. $T + 4$
B. $4 + T$</p> | <p>20) Give 10 to U
A. $10 + U$
B. $U + 10$</p> | <p>10. <u> B </u></p> |
| | | <p>11. <u> A </u></p> |
| | | <p>12. <u> A </u></p> |
| | | <p>13. <u> B </u></p> |
| | | <p>14. <u> A </u></p> |
| | | <p>15. <u> B </u></p> |
| | | <p>16. <u> A </u></p> |
| | | <p>17. <u> B </u></p> |
| | | <p>18. <u> B </u></p> |
| | | <p>19. <u> A </u></p> |
| | | <p>20. <u> B </u></p> |



Determine which letter best represents the expression.

Answers

1) Multiply 17 by B

A. $B \times 17$

B. $17 \times B$

2) Take 20 from C

A. $20 - C$

B. $C - 20$

3) Find D times as much as 18

A. $18 \times D$

B. $D \times 18$

4) Divide 6 by E

A. $E \div 6$

B. $6 \div E$

5) Give 9 to F

A. $F + 9$

B. $9 + F$

6) Divide 7 by G

A. $7 \div G$

B. $G \div 7$

7) Give 16 to H

A. $H + 16$

B. $16 + H$

8) Divide 15 by I

A. $15 \div I$

B. $I \div 15$

9) Divide 10 by J

A. $10 \div J$

B. $J \div 10$

10) Subtract 16 from K

A. $K - 16$

B. $16 - K$

11) Add 4 to L

A. $L + 4$

B. $4 + L$

12) Divide 18 by M

A. $M \div 18$

B. $18 \div M$

13) Divide 7 by N

A. $N \div 7$

B. $7 \div N$

14) Multiply 15 by O

A. $O \times 15$

B. $15 \times O$

15) Find P times as much as 3

A. $P \times 3$

B. $3 \times P$

16) Add 3 to Q

A. $3 + Q$

B. $Q + 3$

17) Take 15 from R

A. $15 - R$

B. $R - 15$

18) Give 7 to S

A. $7 + S$

B. $S + 7$

19) Add 10 to T

A. $10 + T$

B. $T + 10$

20) Give 20 to U

A. $U + 20$

B. $20 + U$

1. _____

2. _____

3. _____

4. _____

5. _____

6. _____

7. _____

8. _____

9. _____

10. _____

11. _____

12. _____

13. _____

14. _____

15. _____

16. _____

17. _____

18. _____

19. _____

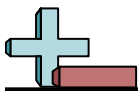
20. _____



Determine which letter best represents the expression.

Answers

- | | | |
|---|--|-----------------------------|
| 1) Multiply 17 by B
A. $B \times 17$
B. $17 \times B$ | 2) Take 20 from C
A. $20 - C$
B. $C - 20$ | 1. <u> B </u> |
| 3) Find D times as much as 18
A. $18 \times D$
B. $D \times 18$ | 4) Divide 6 by E
A. $E \div 6$
B. $6 \div E$ | 2. <u> B </u> |
| 5) Give 9 to F
A. $F + 9$
B. $9 + F$ | 6) Divide 7 by G
A. $7 \div G$
B. $G \div 7$ | 3. <u> A </u> |
| 7) Give 16 to H
A. $H + 16$
B. $16 + H$ | 8) Divide 15 by I
A. $15 \div I$
B. $I \div 15$ | 4. <u> B </u> |
| 9) Divide 10 by J
A. $10 \div J$
B. $J \div 10$ | 10) Subtract 16 from K
A. $K - 16$
B. $16 - K$ | 5. <u> A </u> |
| 11) Add 4 to L
A. $L + 4$
B. $4 + L$ | 12) Divide 18 by M
A. $M \div 18$
B. $18 \div M$ | 6. <u> A </u> |
| 13) Divide 7 by N
A. $N \div 7$
B. $7 \div N$ | 14) Multiply 15 by O
A. $O \times 15$
B. $15 \times O$ | 7. <u> A </u> |
| 15) Find P times as much as 3
A. $P \times 3$
B. $3 \times P$ | 16) Add 3 to Q
A. $3 + Q$
B. $Q + 3$ | 8. <u> A </u> |
| 17) Take 15 from R
A. $15 - R$
B. $R - 15$ | 18) Give 7 to S
A. $7 + S$
B. $S + 7$ | 9. <u> A </u> |
| 19) Add 10 to T
A. $10 + T$
B. $T + 10$ | 20) Give 20 to U
A. $U + 20$
B. $20 + U$ | 10. <u> A </u> |
| | | 11. <u> A </u> |
| | | 12. <u> B </u> |
| | | 13. <u> B </u> |
| | | 14. <u> B </u> |
| | | 15. <u> B </u> |
| | | 16. <u> B </u> |
| | | 17. <u> B </u> |
| | | 18. <u> B </u> |
| | | 19. <u> B </u> |
| | | 20. <u> A </u> |



Determine which letter best represents the expression.

Answers

- 1) Subtract 19 from B
 A. $B - 19$
 B. $19 - B$

- 2) Subtract 9 from C
 A. $9 - C$
 B. $C - 9$

- 3) Give 4 to D
 A. $4 + D$
 B. $D + 4$

- 4) Multiply 12 by E
 A. $12 \times E$
 B. $E \times 12$

- 5) Take 6 from F
 A. $F - 6$
 B. $6 - F$

- 6) Add 15 to G
 A. $G + 15$
 B. $15 + G$

- 7) Take 1 from H
 A. $1 - H$
 B. $H - 1$

- 8) Take 5 from I
 A. $I - 5$
 B. $5 - I$

- 9) Give 2 to J
 A. $2 + J$
 B. $J + 2$

- 10) Give 11 to K
 A. $11 + K$
 B. $K + 11$

- 11) Divide 5 by L
 A. $L \div 5$
 B. $5 \div L$

- 12) Add 16 to M
 A. $M + 16$
 B. $16 + M$

- 13) Multiply 6 by N
 A. $6 \times N$
 B. $N \times 6$

- 14) Add 20 to O
 A. $20 + O$
 B. $O + 20$

- 15) Take 3 from P
 A. $3 - P$
 B. $P - 3$

- 16) Multiply 14 by Q
 A. $Q \times 14$
 B. $14 \times Q$

- 17) Give 3 to R
 A. $R + 3$
 B. $3 + R$

- 18) Give 6 to S
 A. $S + 6$
 B. $6 + S$

- 19) Find T times as much as 5
 A. $5 \times T$
 B. $T \times 5$

- 20) Add 5 to U
 A. $5 + U$
 B. $U + 5$

1. _____

2. _____

3. _____

4. _____

5. _____

6. _____

7. _____

8. _____

9. _____

10. _____

11. _____

12. _____

13. _____

14. _____

15. _____

16. _____

17. _____

18. _____

19. _____

20. _____

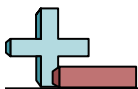


Determine which letter best represents the expression.

- 1) Subtract 19 from B
A. $B - 19$
B. $19 - B$
- 2) Subtract 9 from C
A. $9 - C$
B. $C - 9$
- 3) Give 4 to D
A. $4 + D$
B. $D + 4$
- 4) Multiply 12 by E
A. $12 \times E$
B. $E \times 12$
- 5) Take 6 from F
A. $F - 6$
B. $6 - F$
- 6) Add 15 to G
A. $G + 15$
B. $15 + G$
- 7) Take 1 from H
A. $1 - H$
B. $H - 1$
- 8) Take 5 from I
A. $I - 5$
B. $5 - I$
- 9) Give 2 to J
A. $2 + J$
B. $J + 2$
- 10) Give 11 to K
A. $11 + K$
B. $K + 11$
- 11) Divide 5 by L
A. $L \div 5$
B. $5 \div L$
- 12) Add 16 to M
A. $M + 16$
B. $16 + M$
- 13) Multiply 6 by N
A. $6 \times N$
B. $N \times 6$
- 14) Add 20 to O
A. $20 + O$
B. $O + 20$
- 15) Take 3 from P
A. $3 - P$
B. $P - 3$
- 16) Multiply 14 by Q
A. $Q \times 14$
B. $14 \times Q$
- 17) Give 3 to R
A. $R + 3$
B. $3 + R$
- 18) Give 6 to S
A. $S + 6$
B. $6 + S$
- 19) Find T times as much as 5
A. $5 \times T$
B. $T \times 5$
- 20) Add 5 to U
A. $5 + U$
B. $U + 5$

Answers

1. **A**
2. **B**
3. **B**
4. **A**
5. **A**
6. **A**
7. **B**
8. **A**
9. **B**
10. **B**
11. **B**
12. **A**
13. **A**
14. **B**
15. **B**
16. **B**
17. **A**
18. **A**
19. **A**
20. **B**



Determine which letter best represents the expression.

Answers

1) Find B times as much as 12

A. $12 \times B$

B. $B \times 12$

2) Divide 3 by C

A. $C \div 3$

B. $3 \div C$

3) Give 5 to D

A. $5 + D$

B. $D + 5$

4) Give 19 to E

A. $19 + E$

B. $E + 19$

5) Divide 8 by F

A. $F \div 8$

B. $8 \div F$

6) Divide 12 by G

A. $G \div 12$

B. $12 \div G$

7) Give 17 to H

A. $17 + H$

B. $H + 17$

8) Divide 9 by I

A. $9 \div I$

B. $I \div 9$

9) Find J times as much as 8

A. $J \times 8$

B. $8 \times J$

10) Multiply 20 by K

A. $20 \times K$

B. $K \times 20$

11) Subtract 19 from L

A. $19 - L$

B. $L - 19$

12) Subtract 13 from M

A. $13 - M$

B. $M - 13$

13) Multiply 19 by N

A. $19 \times N$

B. $N \times 19$

14) Take 15 from O

A. $O - 15$

B. $15 - O$

15) Find P times as much as 12

A. $P \times 12$

B. $12 \times P$

16) Divide 20 by Q

A. $20 \div Q$

B. $Q \div 20$

17) Multiply 5 by R

A. $R \times 5$

B. $5 \times R$

18) Subtract 18 from S

A. $18 - S$

B. $S - 18$

19) Add 20 to T

A. $20 + T$

B. $T + 20$

20) Divide 19 by U

A. $U \div 19$

B. $19 \div U$

1. _____

2. _____

3. _____

4. _____

5. _____

6. _____

7. _____

8. _____

9. _____

10. _____

11. _____

12. _____

13. _____

14. _____

15. _____

16. _____

17. _____

18. _____

19. _____

20. _____



Determine which letter best represents the expression.

- 1) Find B times as much as 12
A. $12 \times B$
B. $B \times 12$
- 2) Divide 3 by C
A. $C \div 3$
B. $3 \div C$
- 3) Give 5 to D
A. $5 + D$
B. $D + 5$
- 4) Give 19 to E
A. $19 + E$
B. $E + 19$
- 5) Divide 8 by F
A. $F \div 8$
B. $8 \div F$
- 6) Divide 12 by G
A. $G \div 12$
B. $12 \div G$
- 7) Give 17 to H
A. $17 + H$
B. $H + 17$
- 8) Divide 9 by I
A. $9 \div I$
B. $I \div 9$
- 9) Find J times as much as 8
A. $J \times 8$
B. $8 \times J$
- 10) Multiply 20 by K
A. $20 \times K$
B. $K \times 20$
- 11) Subtract 19 from L
A. $19 - L$
B. $L - 19$
- 12) Subtract 13 from M
A. $13 - M$
B. $M - 13$
- 13) Multiply 19 by N
A. $19 \times N$
B. $N \times 19$
- 14) Take 15 from O
A. $O - 15$
B. $15 - O$
- 15) Find P times as much as 12
A. $P \times 12$
B. $12 \times P$
- 16) Divide 20 by Q
A. $20 \div Q$
B. $Q \div 20$
- 17) Multiply 5 by R
A. $R \times 5$
B. $5 \times R$
- 18) Subtract 18 from S
A. $18 - S$
B. $S - 18$
- 19) Add 20 to T
A. $20 + T$
B. $T + 20$
- 20) Divide 19 by U
A. $U \div 19$
B. $19 \div U$

Answers

1. **A**
2. **B**
3. **B**
4. **B**
5. **B**
6. **B**
7. **B**
8. **A**
9. **B**
10. **A**
11. **B**
12. **B**
13. **A**
14. **A**
15. **B**
16. **A**
17. **B**
18. **B**
19. **B**
20. **B**



Determine which letter best represents the expression.

Answers

- 1) Add 14 to B
 A. $14 + B$
 B. $B + 14$

- 2) Give 1 to C
 A. $C + 1$
 B. $1 + C$

- 3) Give 3 to D
 A. $3 + D$
 B. $D + 3$

- 4) Multiply 4 by E
 A. $4 \times E$
 B. $E \times 4$

- 5) Divide 1 by F
 A. $F \div 1$
 B. $1 \div F$

- 6) Subtract 18 from G
 A. $G - 18$
 B. $18 - G$

- 7) Multiply 12 by H
 A. $H \times 12$
 B. $12 \times H$

- 8) Take 2 from I
 A. $2 - I$
 B. $I - 2$

- 9) Add 4 to J
 A. $4 + J$
 B. $J + 4$

- 10) Give 5 to K
 A. $K + 5$
 B. $5 + K$

- 11) Find L times as much as 20
 A. $20 \times L$
 B. $L \times 20$

- 12) Divide 3 by M
 A. $M \div 3$
 B. $3 \div M$

- 13) Add 17 to N
 A. $17 + N$
 B. $N + 17$

- 14) Find O times as much as 11
 A. $O \times 11$
 B. $11 \times O$

- 15) Divide 1 by P
 A. $1 \div P$
 B. $P \div 1$

- 16) Take 13 from Q
 A. $13 - Q$
 B. $Q - 13$

- 17) Multiply 1 by R
 A. $R \times 1$
 B. $1 \times R$

- 18) Divide 17 by S
 A. $17 \div S$
 B. $S \div 17$

- 19) Take 11 from T
 A. $T - 11$
 B. $11 - T$

- 20) Find U times as much as 17
 A. $17 \times U$
 B. $U \times 17$

1. _____

2. _____

3. _____

4. _____

5. _____

6. _____

7. _____

8. _____

9. _____

10. _____

11. _____

12. _____

13. _____

14. _____

15. _____

16. _____

17. _____

18. _____

19. _____

20. _____



Determine which letter best represents the expression.

Answers

- | | | |
|---|---|------------------------------------|
| <p>1) Add 14 to B
A. $14 + B$
B. $B + 14$</p> | <p>2) Give 1 to C
A. $C + 1$
B. $1 + C$</p> | <p>1. <u> B </u></p> |
| <p>3) Give 3 to D
A. $3 + D$
B. $D + 3$</p> | <p>4) Multiply 4 by E
A. $4 \times E$
B. $E \times 4$</p> | <p>2. <u> A </u></p> |
| <p>5) Divide 1 by F
A. $F \div 1$
B. $1 \div F$</p> | <p>6) Subtract 18 from G
A. $G - 18$
B. $18 - G$</p> | <p>3. <u> B </u></p> |
| <p>7) Multiply 12 by H
A. $H \times 12$
B. $12 \times H$</p> | <p>8) Take 2 from I
A. $2 - I$
B. $I - 2$</p> | <p>4. <u> A </u></p> |
| <p>9) Add 4 to J
A. $4 + J$
B. $J + 4$</p> | <p>10) Give 5 to K
A. $K + 5$
B. $5 + K$</p> | <p>5. <u> B </u></p> |
| <p>11) Find L times as much as 20
A. $20 \times L$
B. $L \times 20$</p> | <p>12) Divide 3 by M
A. $M \div 3$
B. $3 \div M$</p> | <p>6. <u> A </u></p> |
| <p>13) Add 17 to N
A. $17 + N$
B. $N + 17$</p> | <p>14) Find O times as much as 11
A. $O \times 11$
B. $11 \times O$</p> | <p>7. <u> B </u></p> |
| <p>15) Divide 1 by P
A. $1 \div P$
B. $P \div 1$</p> | <p>16) Take 13 from Q
A. $13 - Q$
B. $Q - 13$</p> | <p>8. <u> B </u></p> |
| <p>17) Multiply 1 by R
A. $R \times 1$
B. $1 \times R$</p> | <p>18) Divide 17 by S
A. $17 \div S$
B. $S \div 17$</p> | <p>9. <u> A </u></p> |
| <p>19) Take 11 from T
A. $T - 11$
B. $11 - T$</p> | <p>20) Find U times as much as 17
A. $17 \times U$
B. $U \times 17$</p> | <p>10. <u> A </u></p> |
| | | <p>11. <u> A </u></p> |
| | | <p>12. <u> B </u></p> |
| | | <p>13. <u> B </u></p> |
| | | <p>14. <u> B </u></p> |
| | | <p>15. <u> A </u></p> |
| | | <p>16. <u> B </u></p> |
| | | <p>17. <u> B </u></p> |
| | | <p>18. <u> A </u></p> |
| | | <p>19. <u> A </u></p> |
| | | <p>20. <u> A </u></p> |



Determine which letter best represents the expression.

Answers

- 1) Divide 9 by B
 A. $9 \div B$
 B. $B \div 9$

- 2) Divide 14 by C
 A. $14 \div C$
 B. $C \div 14$

- 3) Divide 7 by D
 A. $D \div 7$
 B. $7 \div D$

- 4) Give 3 to E
 A. $E + 3$
 B. $3 + E$

- 5) Add 11 to F
 A. $11 + F$
 B. $F + 11$

- 6) Give 9 to G
 A. $9 + G$
 B. $G + 9$

- 7) Divide 4 by H
 A. $H \div 4$
 B. $4 \div H$

- 8) Divide 8 by I
 A. $I \div 8$
 B. $8 \div I$

- 9) Find J times as much as 3
 A. $3 \times J$
 B. $J \times 3$

- 10) Subtract 5 from K
 A. $K - 5$
 B. $5 - K$

- 11) Give 9 to L
 A. $9 + L$
 B. $L + 9$

- 12) Take 14 from M
 A. $14 - M$
 B. $M - 14$

- 13) Subtract 11 from N
 A. $11 - N$
 B. $N - 11$

- 14) Divide 5 by O
 A. $O \div 5$
 B. $5 \div O$

- 15) Divide 5 by P
 A. $P \div 5$
 B. $5 \div P$

- 16) Take 13 from Q
 A. $13 - Q$
 B. $Q - 13$

- 17) Divide 11 by R
 A. $R \div 11$
 B. $11 \div R$

- 18) Give 10 to S
 A. $S + 10$
 B. $10 + S$

- 19) Divide 9 by T
 A. $9 \div T$
 B. $T \div 9$

- 20) Subtract 2 from U
 A. $2 - U$
 B. $U - 2$

1. _____

2. _____

3. _____

4. _____

5. _____

6. _____

7. _____

8. _____

9. _____

10. _____

11. _____

12. _____

13. _____

14. _____

15. _____

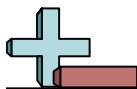
16. _____

17. _____

18. _____

19. _____

20. _____



Determine which letter best represents the expression.

Answers

- | | | |
|---|--|------------------------------------|
| <p>1) Divide 9 by B
A. $9 \div B$
B. $B \div 9$</p> | <p>2) Divide 14 by C
A. $14 \div C$
B. $C \div 14$</p> | <p>1. <u> A </u></p> |
| <p>3) Divide 7 by D
A. $D \div 7$
B. $7 \div D$</p> | <p>4) Give 3 to E
A. $E + 3$
B. $3 + E$</p> | <p>2. <u> A </u></p> |
| <p>5) Add 11 to F
A. $11 + F$
B. $F + 11$</p> | <p>6) Give 9 to G
A. $9 + G$
B. $G + 9$</p> | <p>3. <u> B </u></p> |
| <p>7) Divide 4 by H
A. $H \div 4$
B. $4 \div H$</p> | <p>8) Divide 8 by I
A. $I \div 8$
B. $8 \div I$</p> | <p>4. <u> A </u></p> |
| <p>9) Find J times as much as 3
A. $3 \times J$
B. $J \times 3$</p> | <p>10) Subtract 5 from K
A. $K - 5$
B. $5 - K$</p> | <p>5. <u> B </u></p> |
| <p>11) Give 9 to L
A. $9 + L$
B. $L + 9$</p> | <p>12) Take 14 from M
A. $14 - M$
B. $M - 14$</p> | <p>6. <u> B </u></p> |
| <p>13) Subtract 11 from N
A. $11 - N$
B. $N - 11$</p> | <p>14) Divide 5 by O
A. $O \div 5$
B. $5 \div O$</p> | <p>7. <u> B </u></p> |
| <p>15) Divide 5 by P
A. $P \div 5$
B. $5 \div P$</p> | <p>16) Take 13 from Q
A. $13 - Q$
B. $Q - 13$</p> | <p>8. <u> B </u></p> |
| <p>17) Divide 11 by R
A. $R \div 11$
B. $11 \div R$</p> | <p>18) Give 10 to S
A. $S + 10$
B. $10 + S$</p> | <p>9. <u> A </u></p> |
| <p>19) Divide 9 by T
A. $9 \div T$
B. $T \div 9$</p> | <p>20) Subtract 2 from U
A. $2 - U$
B. $U - 2$</p> | <p>10. <u> A </u></p> |
| | | <p>11. <u> B </u></p> |
| | | <p>12. <u> B </u></p> |
| | | <p>13. <u> B </u></p> |
| | | <p>14. <u> B </u></p> |
| | | <p>15. <u> B </u></p> |
| | | <p>16. <u> B </u></p> |
| | | <p>17. <u> B </u></p> |
| | | <p>18. <u> A </u></p> |
| | | <p>19. <u> A </u></p> |
| | | <p>20. <u> B </u></p> |